

Chapter 3 - Virtual Work: Advanced Examples

3.1 Introduction	2
3.1.1 General.....	2
3.2 Ring Beam Examples	3
3.2.1 Example 1	3
3.2.2 Example 2	8
3.2.3 Example 3	15
3.2.4 Example 4	23
3.2.5 Example 5	32
3.2.6 Review of Examples 1 – 5	53
3.3 Grid Examples	64
3.3.1 Example 1	64
3.3.2 Example 2	70
3.3.3 Example 3	79

Rev. 1

3.1 Introduction

3.1.1 *General*

To further illustrate the virtual work method applied to more complex structures, the following sets of examples are given. The examples build upon each other to illustrate how the analysis of a complex structure can be broken down.

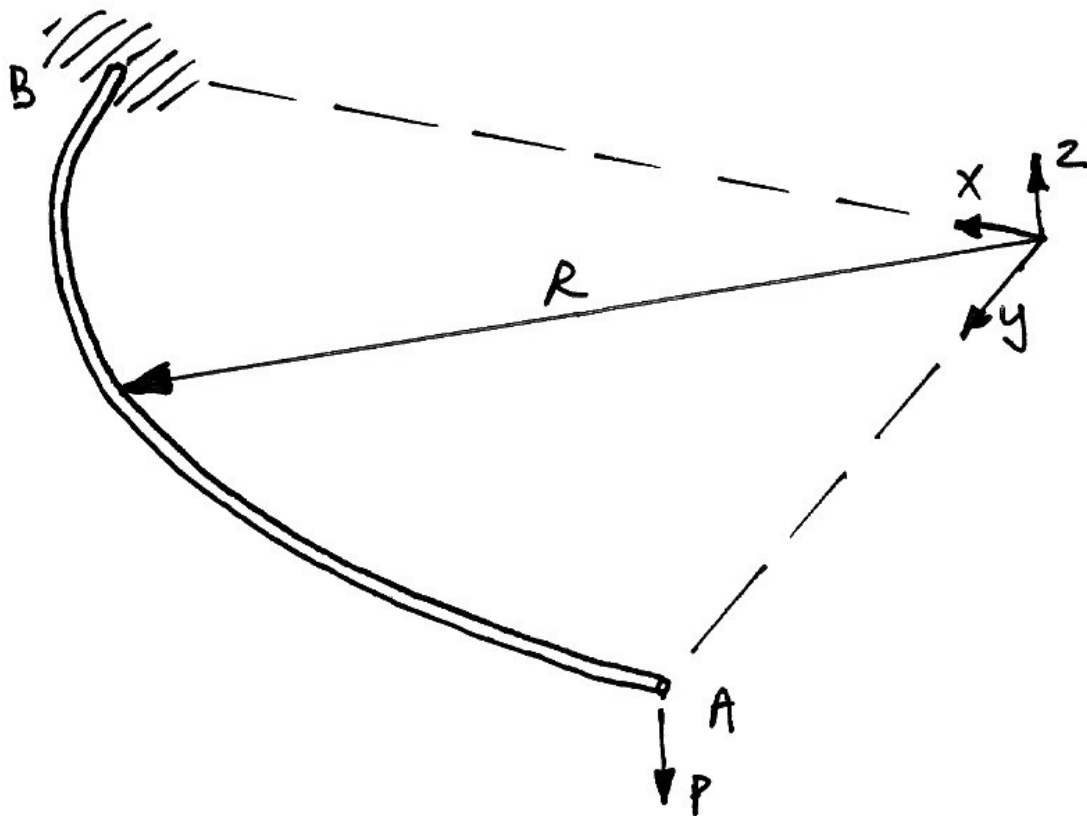
3.2 Ring Beam Examples

3.2.1 Example 1

Problem

For the quarter-circle beam shown, which has flexural and torsional rigidities of EI and GJ respectively, show that the deflection at A due to the point load, P , at A is:

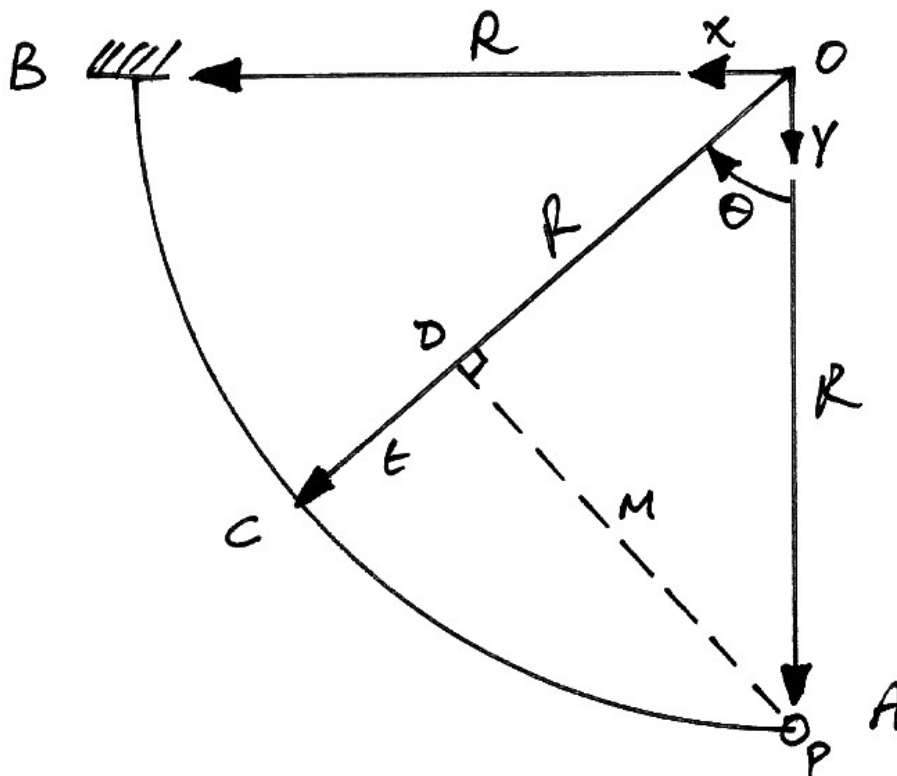
$$\delta_{Ay} = \frac{PR^3}{EI} \cdot \frac{\pi}{4} + \frac{PR^3}{GJ} \left(\frac{3\pi - 8}{4} \right)$$



Solution

The point load will cause both bending and torsion in the beam member. Therefore both effects must be accounted for in the deflection calculations. Shear effects are ignored.

Drawing a plan view of the structure, we can identify the perpendicular distance of the force, P , from the section of consideration, which we locate by the angle θ from the y -axis:



The bending moment at C is P times the perpendicular distance $|AC|$, called m . The torsion at C is the force times the transverse perpendicular distance $|CD|$, called t . Using the triangle ODA , we have:

$$\sin \theta = \frac{m}{R} \quad \therefore m = R \sin \theta$$

$$\cos \theta = \frac{|OD|}{R} \quad \therefore |OD| = R \cos \theta$$

The distance $|CD|$, or t , is $R - |OD|$, thus:

$$\begin{aligned} t &= R - |OD| \\ &= R - R \cos \theta \\ &= R(1 - \cos \theta) \end{aligned}$$

Thus the bending moment at point C is:

$$\begin{aligned} M(\theta) &= Pm \\ &= PR \sin \theta \end{aligned} \quad (1)$$

The torsion at C is:

$$\begin{aligned} T(\theta) &= Pt \\ &= PR(1 - \cos \theta) \end{aligned} \quad (2)$$

Using virtual work, we have:

$$\begin{aligned} \delta W &= 0 \\ \delta W_E &= \delta W_I \\ \delta_{A_y} \cdot \delta F &= \int \frac{M}{EI} \cdot \delta M \, ds + \int \frac{T}{GJ} \cdot \delta T \, ds \end{aligned} \quad (3)$$

This equation represents the virtual work done by the application of a virtual force, δF , in the vertical direction at A , with its internal equilibrium virtual moments and torques, δM and δT and so is the equilibrium system. The compatible displacements system is that of the actual deformations of the structure, externally at A , and internally by the curvatures and twists, M/EI and T/GJ .

Taking the virtual force, $\delta F = 1$, and since it is applied at the same location and direction as the actual force P , we have, from equations (1) and (2):

$$\delta M(\theta) = R \sin \theta \quad (4)$$

$$\delta T(\theta) = R(1 - \cos \theta) \quad (5)$$

Thus, the virtual work equation, (3), becomes:

$$\begin{aligned} \delta_{Ay} \cdot 1 &= \frac{1}{EI} \int M \cdot \delta M \, ds + \frac{1}{GJ} \int T \cdot \delta T \, ds \\ &= \frac{1}{EI} \int_0^{\pi/2} [PR \sin \theta][R \sin \theta] R d\theta + \frac{1}{GJ} \int_0^{\pi/2} [PR(1 - \cos \theta)][R(1 - \cos \theta)] R d\theta \end{aligned} \quad (6)$$

In which we have related the curve distance, ds , to the arc distance, $ds = R d\theta$, which allows us to integrate round the angle rather than along the curve. Multiplying out:

$$\delta_{Ay} = \frac{PR^3}{EI} \int_0^{\pi/2} \sin^2 \theta \, d\theta + \frac{PR^3}{GJ} \int_0^{\pi/2} (1 - \cos \theta)^2 \, d\theta \quad (7)$$

Considering the first term, from the integrals' appendix, we have:

$$\begin{aligned}
 \int_0^{\pi/2} \sin^2 \theta \, d\theta &= \left[\frac{\theta}{2} - \frac{1}{4} \sin 2\theta \right]_0^{\pi/2} \\
 &= \left[\left(\frac{\pi}{4} - \frac{1}{4} \cdot 0 \right) - (0 - 0) \right] \\
 &= \frac{\pi}{4}
 \end{aligned} \tag{8}$$

The second term is:

$$\begin{aligned}
 \int_0^{\pi/2} (1 - \cos \theta)^2 \, d\theta &= \int_0^{\pi/2} (1 - 2\cos \theta + \cos^2 \theta) \, d\theta \\
 &= \int_0^{\pi/2} 1 \, d\theta - 2 \int_0^{\pi/2} \cos \theta \, d\theta + \int_0^{\pi/2} \cos^2 \theta \, d\theta
 \end{aligned} \tag{9}$$

Thus, from the integrals in the appendix:

$$\begin{aligned}
 \int_0^{\pi/2} (1 - \cos \theta)^2 \, d\theta &= [\theta]_0^{\pi/2} - 2[\sin \theta]_0^{\pi/2} + \left[\frac{\theta}{2} + \frac{1}{4} \sin 2\theta \right]_0^{\pi/2} \\
 &= \left[\left(\frac{\pi}{2} \right) - (0) \right] - 2[(1) - (0)] + \left[\left(\frac{\pi}{4} + \frac{1}{4} \cdot 0 \right) - (0 + 0) \right] \\
 &= \frac{\pi}{2} - 2 + \frac{\pi}{4} \\
 &= \frac{3\pi - 8}{4}
 \end{aligned} \tag{10}$$

Substituting these results back into equation (7) gives the desired result:

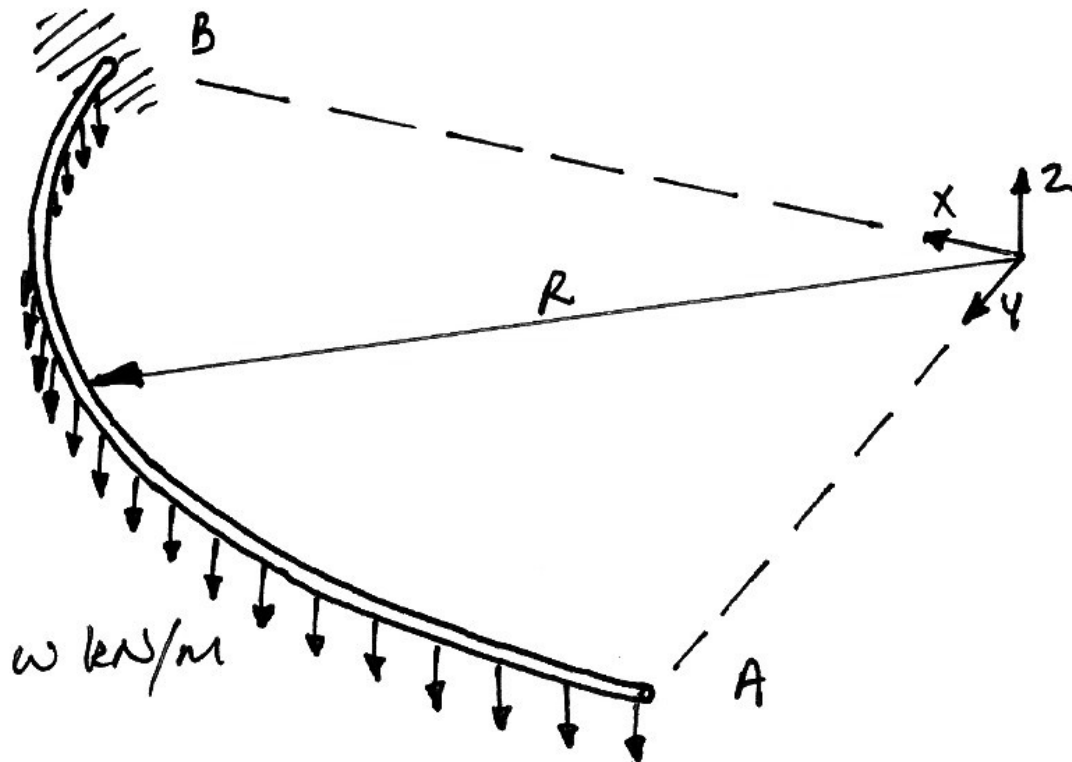
$$\delta_{Ay} = \frac{PR^3}{EI} \frac{\pi}{4} + \frac{PR^3}{GJ} \left(\frac{3\pi - 8}{4} \right) \tag{11}$$

3.2.2 Example 2

Problem

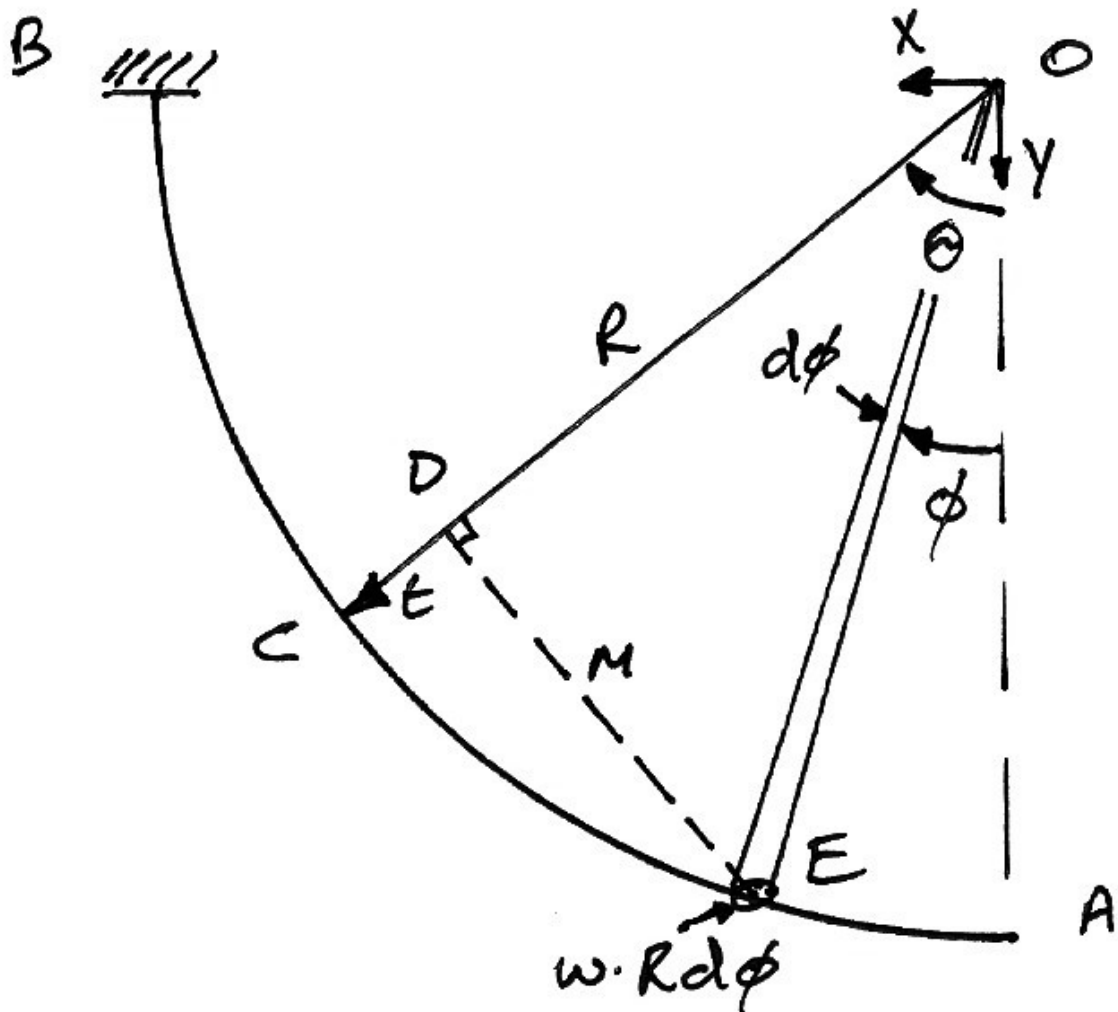
For the quarter-circle beam shown, which has flexural and torsional rigidities of EI and GJ respectively, show that the deflection at A due to the uniformly distributed load, w , shown is:

$$\delta_{Ay} = \frac{wR^4}{EI} \cdot \frac{1}{2} + \frac{wR^4}{GJ} \cdot \frac{(\pi - 2)^2}{8}$$



Solution

The UDL will cause both bending and torsion in the beam member and both effects must be accounted for. Again, shear effects are ignored.



Drawing a plan view of the structure, we must identify the moment and torsion at some point C , as defined by the angle θ from the y -axis, caused by the elemental load at E , located at ϕ from the y -axis. The load is given by:

$$\begin{aligned}
 \text{Force} &= \text{UDL} \times \text{length} \\
 &= w \cdot ds \\
 &= w \cdot R \cdot d\phi
 \end{aligned}
 \tag{12}$$

The bending moment at C is the load at E times the perpendicular distance $|DE|$, labelled m . The torsion at C is the force times the transverse perpendicular distance $|CD|$, labelled t . Using the triangle ODE , we have:

$$\begin{aligned}\sin(\theta - \phi) &= \frac{m}{R} & \therefore m &= R \sin(\theta - \phi) \\ \cos(\theta - \phi) &= \frac{|OD|}{R} & \therefore |OD| &= R \cos(\theta - \phi)\end{aligned}$$

The distance t is thus:

$$\begin{aligned}t &= R - |OD| \\ &= R - R \cos(\theta - \phi) \\ &= R[1 - \cos(\theta - \phi)]\end{aligned}$$

The differential bending moment at point C , caused by the elemental load at E is thus:

$$\begin{aligned}dM(\theta) &= \text{Force} \times \text{Distance} \\ &= [wRd\phi] \times m \\ &= [wRd\phi][R \sin(\theta - \phi)] \\ &= wR^2 \sin(\theta - \phi) d\phi\end{aligned}$$

Integrating to find the total moment at C caused by the UDL from A to C around the angle 0 to θ gives:

$$\begin{aligned}
 M(\theta) &= \int dM(\theta) \\
 &= \int_{\phi=0}^{\phi=\theta} wR^2 \sin(\theta - \phi) d\phi \\
 &= wR^2 \int_{\phi=0}^{\phi=\theta} \sin(\theta - \phi) d\phi
 \end{aligned}$$

In this integral θ is a constant and only ϕ is considered a variable. Using the identity from the integral table gives:

$$\begin{aligned}
 M(\theta) &= wR^2 \left[\cos(\theta - \phi) \right]_{\phi=0}^{\phi=\theta} \\
 &= wR^2 \left[(\cos 0) - \cos \theta \right]
 \end{aligned}$$

And so:

$$M(\theta) = wR^2(1 - \cos \theta) \quad (13)$$

Along similar lines, the torsion at C caused by the load at E is:

$$\begin{aligned}
 dT(\theta) &= [wRd\phi] \times t \\
 &= [wRd\phi] \{ R[1 - \cos(\theta - \phi)] \} \\
 &= wR^2 [1 - \cos(\theta - \phi)] d\phi
 \end{aligned}$$

And integrating for the total torsion at C :

$$\begin{aligned}
T(\theta) &= \int dT(\theta) \\
&= \int_{\phi=0}^{\phi=\theta} wR^2 [1 - \cos(\theta - \phi)] d\phi \\
&= wR^2 \int_{\phi=0}^{\phi=\theta} [1 - \cos(\theta - \phi)] d\phi \\
&= wR^2 \left\{ \int_{\phi=0}^{\phi=\theta} 1 d\phi - \int_{\phi=0}^{\phi=\theta} \cos(\theta - \phi) d\phi \right\}
\end{aligned}$$

Using the integral identity for $\cos(\theta - \phi)$ gives:

$$\begin{aligned}
T(\theta) &= wR^2 \left\{ [\phi]_{\phi=0}^{\phi=\theta} - [-\sin(\theta - \phi)]_{\phi=0}^{\phi=\theta} \right\} \\
&= wR^2 \left\{ \theta + [\sin 0 - \sin \theta] \right\}
\end{aligned}$$

And so the total torsion at C is:

$$T(\theta) = wR^2 (\theta - \sin \theta) \quad (14)$$

To determine the deflection at A , we apply a virtual force, δF , in the vertical direction at A . Along with its internal equilibrium virtual moments and torques, δM and δT and this set forms the equilibrium system. The compatible displacements system is that of the actual deformations of the structure, externally at A , and internally by the curvatures and twists, M/EI and T/GJ . Therefore, using virtual work, we have:

$$\begin{aligned}
\delta W &= 0 \\
\delta W_E &= \delta W_I \\
\delta_{A_y} \cdot \delta F &= \int \frac{M}{EI} \cdot \delta M ds + \int \frac{T}{GJ} \cdot \delta T ds
\end{aligned} \quad (15)$$

Taking the virtual force, $\delta F = 1$, and using the equation for moment and torque at any angle θ from Example 1, we have:

$$\delta M(\theta) = R \sin \theta \quad (16)$$

$$\delta T(\theta) = R(1 - \cos \theta) \quad (17)$$

Thus, the virtual work equation, (15), using equations (13) and (14), becomes:

$$\begin{aligned} \delta_{Ay} \cdot 1 &= \frac{1}{EI} \int M \cdot \delta M \, ds + \frac{1}{GJ} \int T \cdot \delta T \, ds \\ &= \frac{1}{EI} \int_0^{\pi/2} [wR^2(1 - \cos \theta)] [R \sin \theta] R d\theta \\ &\quad + \frac{1}{GJ} \int_0^{\pi/2} [wR^2(\theta - \sin \theta)] [R(1 - \cos \theta)] R d\theta \end{aligned} \quad (18)$$

In which we have related the curve distance, ds , to the arc distance, $ds = R d\theta$ allowing us to integrate round the angle rather than along the curve. Multiplying out:

$$\begin{aligned} \delta_{Ay} &= \frac{wR^4}{EI} \int_0^{\pi/2} (\sin \theta - \sin \theta \cos \theta) d\theta \\ &\quad + \frac{wR^4}{GJ} \int_0^{\pi/2} (\theta - \sin \theta - \theta \cos \theta + \cos \theta \sin \theta) d\theta \end{aligned} \quad (19)$$

Using the respective integrals from the appendix yields:

$$\begin{aligned}
\delta_{Ay} &= \frac{wR^4}{EI} \left[-\cos \theta + \frac{1}{4} \cos 2\theta \right]_0^{\pi/2} \\
&\quad + \frac{wR^4}{GJ} \left[\frac{\theta^2}{2} + \cos \theta - (\theta \sin \theta + \cos \theta) - \frac{1}{4} \cos 2\theta \right]_0^{\pi/2} \\
&= \frac{wR^4}{EI} \left[\left(-0 - \frac{1}{4} \right) - \left(-1 + \frac{1}{4} \right) \right] \\
&\quad + \frac{wR^4}{GJ} \left[\left(\frac{\pi^2}{8} + 0 - \left(\frac{\pi}{2} \cdot 1 + 0 \right) - \frac{1}{4}(-1) \right) - \left(0 + 1 - (0 + 1) - \frac{1}{4} \right) \right] \\
&= \frac{wR^4}{EI} \left[\frac{1}{2} \right] \\
&\quad + \frac{wR^4}{GJ} \left[\frac{\pi^2}{8} - \frac{\pi}{2} + \frac{1}{4} + \frac{1}{4} \right]
\end{aligned}$$

Writing the second term as a common fraction:

$$\delta_{Ay} = \frac{wR^4}{EI} \cdot \frac{1}{2} + \frac{wR^4}{GJ} \left(\frac{\pi^2 - 4\pi + 4}{8} \right)$$

And then factorising, gives the required deflection at A:

$$\delta_{Ay} = \frac{wR^4}{EI} \cdot \frac{1}{2} + \frac{wR^4}{GJ} \cdot \frac{(\pi^2 - 2)^2}{8} \tag{20}$$

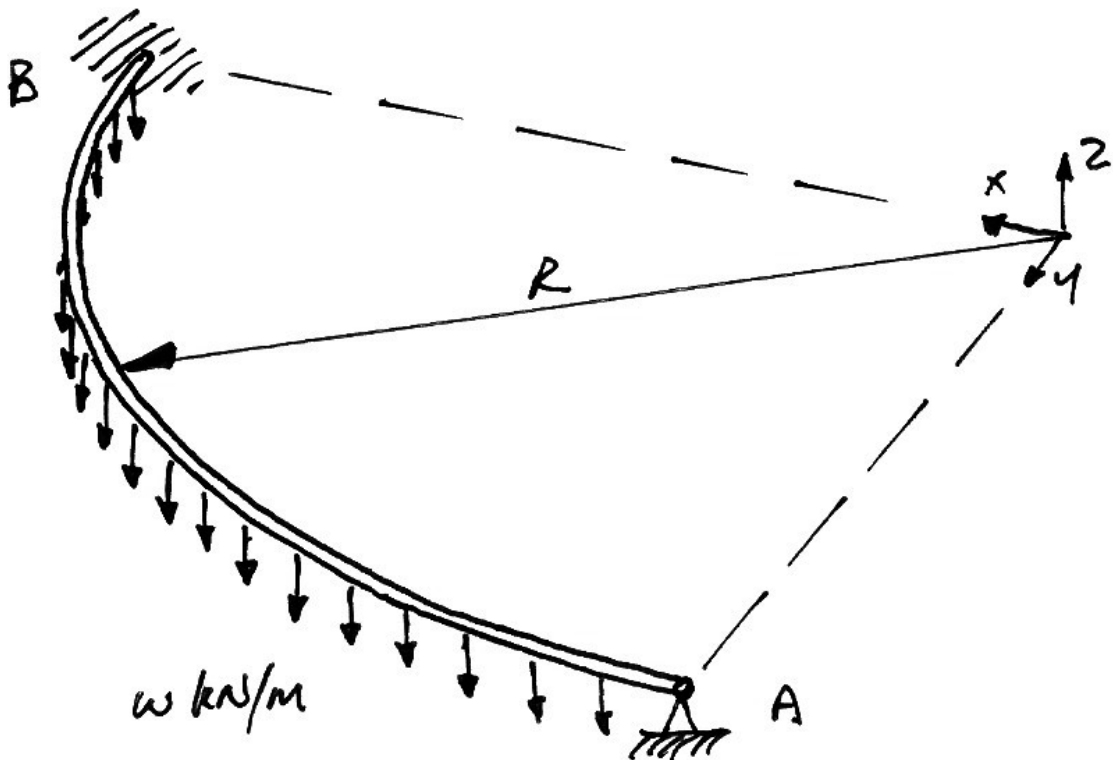
3.2.3 Example 3

Problem

For the quarter-circle beam shown, which has flexural and torsional rigidities of EI and GJ respectively, show that the vertical reaction at A due to the uniformly distributed load, w , shown is:

$$V_A = wR \left[\frac{4\beta + (\pi - 2)^2}{2\beta\pi + 2(3\pi - 8)} \right]$$

where $\beta = \frac{GJ}{EI}$.



Solution

This problem can be solved using two apparently different methods, but which are equivalent. Indeed, examining how they are equivalent leads to insights that make more difficult problems easier, as we shall see in subsequent problems. For both approaches we will make use of the results obtained thus far:

- Deflection at A due to UDL:

$$\delta_{Ay} = \frac{wR^4}{EI} \cdot \frac{1}{2} + \frac{wR^4}{GJ} \cdot \frac{(\pi - 2)^2}{8} \quad (21)$$

- Deflection at A due to point load at A:

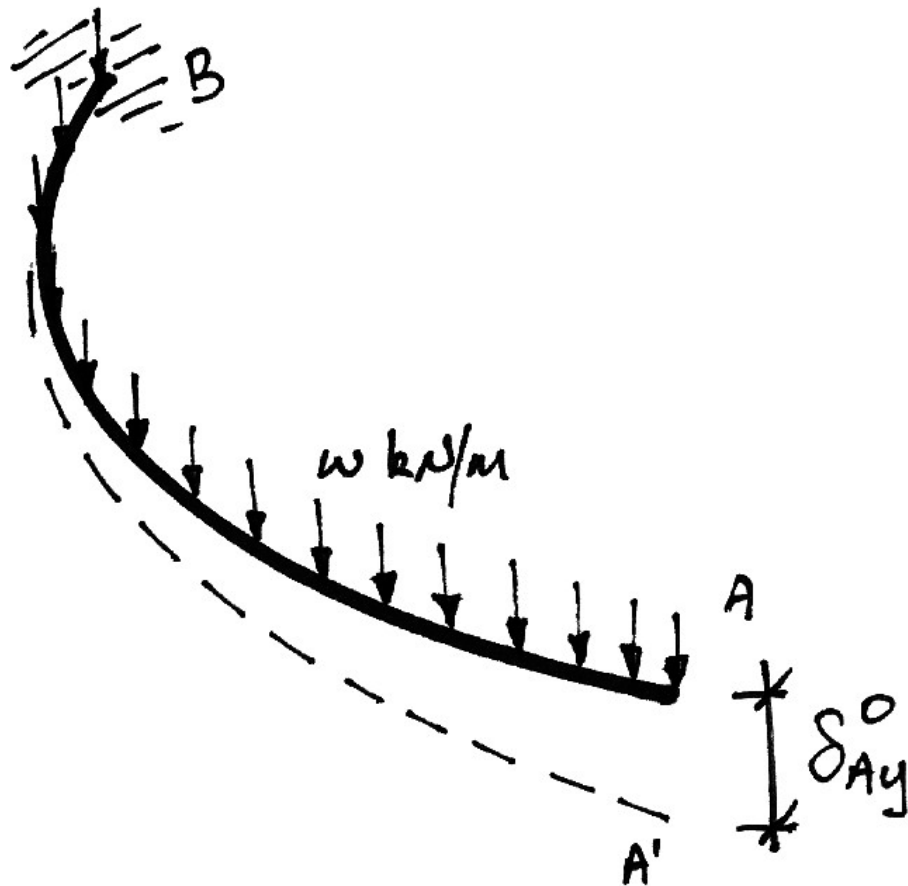
$$\delta_{Ay} = \frac{PR^3}{EI} \cdot \frac{\pi}{4} + \frac{PR^3}{GJ} \left(\frac{3\pi - 8}{4} \right) \quad (22)$$

Using Compatibility of Displacement

The basic approach, which does not require virtual work, is to use compatibility of displacement in conjunction with superposition. If we imagine the support at A removed, we will have a downwards deflection at A caused by the UDL, which equation (21) gives us as:

$$\delta_{Ay}^0 = \frac{wR^4}{EI} \cdot \frac{1}{2} + \frac{wR^4}{GJ} \cdot \frac{(\pi - 2)^2}{8} \quad (23)$$

As illustrated in the following diagram.



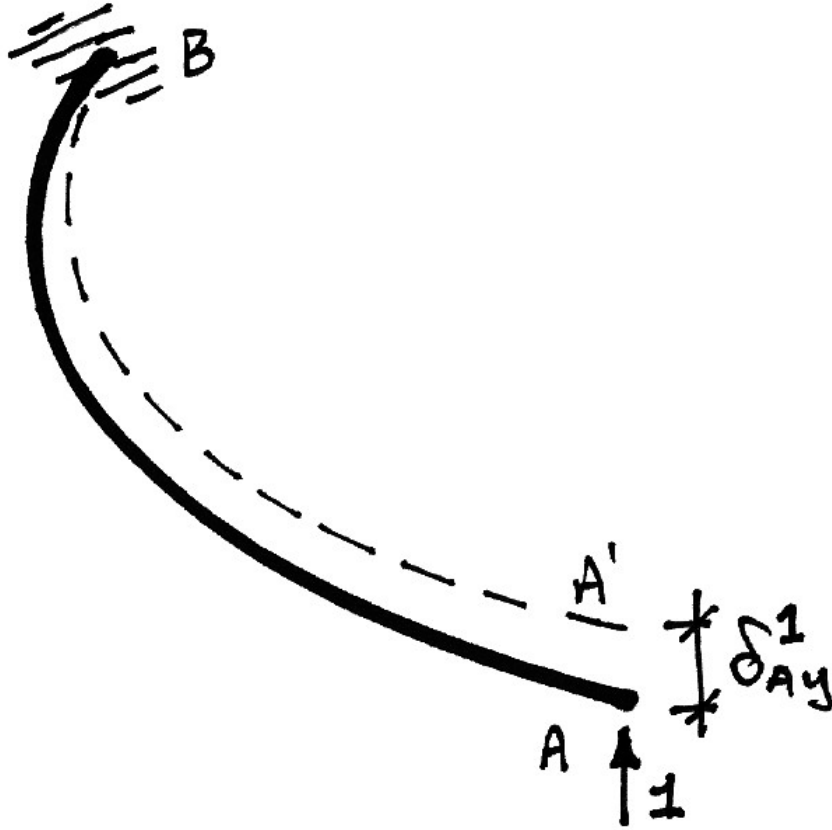
Since in the original structure we will have a support at A we know there is actually no displacement at A . The vertical reaction associated with the support at A , called V , must therefore be such that it causes an exactly equal and opposite deflection, δ_{Ay}^V , to that of the UDL, δ_{Ay}^0 , so that we are left with no deflection at A :

$$\delta_{Ay}^0 + \delta_{Ay}^V = 0 \quad (24)$$

Of course we don't yet know the value of V , but from equation (22), we know the deflection caused by a unit load placed in lieu of V :

$$\delta_{Ay}^1 = \frac{1 \cdot R^3}{EI} \cdot \frac{\pi}{4} + \frac{1 \cdot R^3}{GJ} \left(\frac{3\pi - 8}{4} \right) \quad (25)$$

This is shown in the following diagram:



Using superposition, we know that the deflection caused by the reaction, V , is V times the deflection caused by a unit load:

$$\delta_{Ay}^V = V \cdot \delta_{Ay}^1 \quad (26)$$

Thus equation (24) becomes:

$$\delta_{Ay}^0 + V \cdot \delta_{Ay}^1 = 0 \quad (27)$$

Which we can solve for V :

$$V = -\frac{\delta_{Ay}^0}{\delta_{Ay}^1} \quad (28)$$

If we take downwards deflections to be positive, we then have, from equations(23), (25), and (28):

$$V = -\frac{\left(\frac{wR^4}{EI} \cdot \frac{1}{2} + \frac{wR^4}{GJ} \cdot \frac{(\pi-2)^2}{8}\right)}{-\left[\frac{1 \cdot R^3}{EI} \cdot \frac{\pi}{4} + \frac{1 \cdot R^3}{GJ} \left(\frac{3\pi-8}{4}\right)\right]} \quad (29)$$

The two negative signs cancel, leaving us with a positive value for V indicating that it is in the same direction as the unit load, and so is upwards as expected. Introducing

$\beta = \frac{GJ}{EI}$ and doing some algebra on equation (29) gives:

$$\begin{aligned} V &= wR \left(\frac{1}{EI} \cdot \frac{1}{2} + \frac{1}{\beta EI} \cdot \frac{(\pi-2)^2}{8} \right) \times \left[\frac{1}{EI} \cdot \frac{\pi}{4} + \frac{1}{\beta EI} \left(\frac{3\pi-8}{4} \right) \right]^{-1} \\ &= wR \left(\frac{1}{2} + \frac{1}{\beta} \cdot \frac{(\pi-2)^2}{8} \right) \times \left[\frac{\pi}{4} + \frac{1}{\beta} \left(\frac{3\pi-8}{4} \right) \right]^{-1} \\ &= wR \left(\frac{4\beta + (\pi-2)^2}{8\beta} \right) \times \left[\frac{\beta\pi + (3\pi-8)}{4\beta} \right]^{-1} \\ &= wR \left(\frac{4\beta + (\pi-2)^2}{8\beta} \right) \times \left[\frac{8\beta}{2\beta\pi + 2(3\pi-8)} \right] \end{aligned}$$

And so we finally have the required reaction at A as:

$$V_A = wR \left(\frac{4\beta + (\pi - 2)^2}{2\beta\pi + 2(3\pi - 8)} \right) \quad (30)$$

Using Virtual Work

To calculate the reaction at A using virtual work, we use the following:

- Equilibrium system: the external and internal virtual forces corresponding to a unit virtual force applied in lieu of the required reaction;
- Compatible system: the real external and internal displacements of the original structure subject to the real applied loads.

Thus the virtual work equations are:

$$\begin{aligned} \delta W &= 0 \\ \delta W_E &= \delta W_I \\ \delta_{A_y} \cdot \delta F &= \int \kappa \cdot \delta M \, ds + \int \phi \cdot \delta T \, ds \end{aligned} \quad (31)$$

At this point we introduce some points:

- The real external deflection at A is zero: $\delta_{A_y} = 0$;
- The virtual force, $\delta F = 1$;
- The real curvatures can be expressed using the real bending moments, $\kappa = \frac{M}{EI}$;
- The real twists are expressed from the torque, $\phi = \frac{T}{GJ}$.

These combine to give, from equation (31):

$$0 \cdot 1 = \int_0^L \left[\frac{M}{EI} \right] \cdot \delta M \, ds + \int_0^L \left[\frac{T}{GJ} \right] \cdot \delta T \, ds \quad (32)$$

Next, we use superposition to express the real internal ‘forces’ as those due to the real loading applied to the primary structure plus a multiplier times those due to the unit virtual load applied in lieu of the reaction:

$$M = M^0 + \alpha M^1 \quad T = T^0 + \alpha T^1 \quad (33)$$

Notice that $\delta M = M^1$ and $\delta T = T^1$, but they are still written with separate notation to keep the ideas clear. Thus equation (32) becomes:

$$\begin{aligned} 0 &= \int_0^L \left[\frac{(M^0 + \alpha M^1)}{EI} \right] \cdot \delta M \, ds + \int_0^L \left[\frac{(T^0 + \alpha T^1)}{GJ} \right] \cdot \delta T \, ds \\ 0 &= \int_0^L \frac{M^0}{EI} \cdot \delta M \, ds + \alpha \cdot \int_0^L \frac{M^1}{EI} \cdot \delta M \, ds + \int_0^L \frac{T^0}{GJ} \cdot \delta T \, ds + \alpha \cdot \int_0^L \frac{T^1}{GJ} \cdot \delta T \, ds \end{aligned} \quad (34)$$

And so finally:

$$\alpha = - \frac{\left[\int_0^L \frac{M^0}{EI} \cdot \delta M \, ds + \int_0^L \frac{T^0}{GJ} \cdot \delta T \, ds \right]}{\left[\int_0^L \frac{M^1}{EI} \cdot \delta M \, ds + \int_0^L \frac{T^1}{GJ} \cdot \delta T \, ds \right]} \quad (35)$$

At this point we must note the similarity between equations (35) and (28). From equation (3), it is clear that the numerator in equation (35) is the deflection at A of the primary structure subject to the real loads. Further, from equation (15), the denominator in equation (35) is the deflection at A due to a unit (virtual) load at A.

Neglecting signs, and generalizing somewhat, we can arrive at an ‘empirical’ equation for the calculation of redundants:

$$\alpha = \frac{\delta \text{ due to actual loads}}{\delta \text{ due to unit redundant}} \left. \vphantom{\alpha} \right\} \begin{array}{l} \text{of primary structure along} \\ \text{line of action of redundant} \end{array} \quad (36)$$

Using this form we will quickly be able to determine the solutions to further ring-beam problems.

The solution for α follows directly from the previous examples:

- The numerator is determined as per Example 1;
- The denominator is determined as per Example 2, with $P = 1$.

Of course, these two steps give the results of equations (23) and (25) which were used in equation (28) to obtain equation (29), and leading to the solution, equation (30).

From this it can be seen that compatibility of displacement and virtual work are equivalent ways of looking at the problem. Also it is apparent that the virtual work framework inherently calculates the displacements required in a compatibility analysis. Lastly, equation (36) provides a means for quickly calculating the redundant for other arrangements of the structure from the existing solutions, as will be seen in the next example.

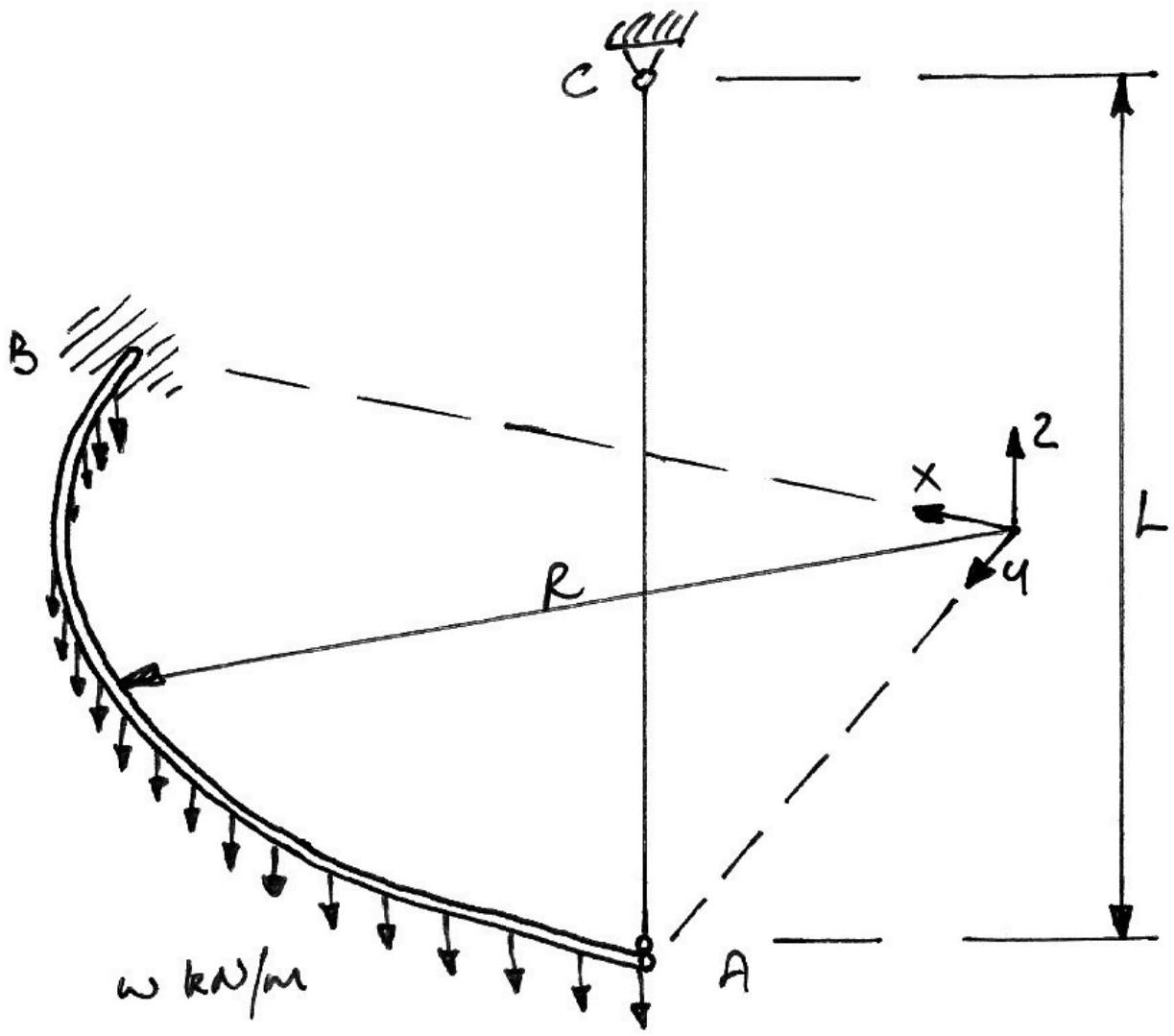
3.2.4 Example 4

Problem

For the structure shown, the quarter-circle beam has flexural and torsional rigidities of EI and GJ respectively and the cable has axial rigidity EA , show that the tension in the cable due to the uniformly distributed load, w , shown is:

$$T = wR \left[4\beta + (\pi - 2)^2 \right] \left[2\pi\beta + 2(3\pi - 8) + 8 \frac{\beta}{\gamma} \cdot \frac{L}{R^3} \right]^{-1}$$

where $\beta = \frac{GJ}{EI}$ and $\gamma = \frac{EA}{EI}$.



Solution

For this solution, we will use the insights gained from Example 3, in particular equation (36). We will then verify this approach using the usual application of virtual work. We will be choosing the cable as the redundant throughout.

Empirical Form


Repeating our ‘empirical’ equation here:

$$\alpha = \frac{\delta \text{ due to actual loads}}{\delta \text{ due to unit redundant}} \left. \vphantom{\frac{\delta \text{ due to actual loads}}{\delta \text{ due to unit redundant}}} \right\} \begin{array}{l} \text{of primary structure along} \\ \text{line of action of redundant} \end{array} \quad (37)$$

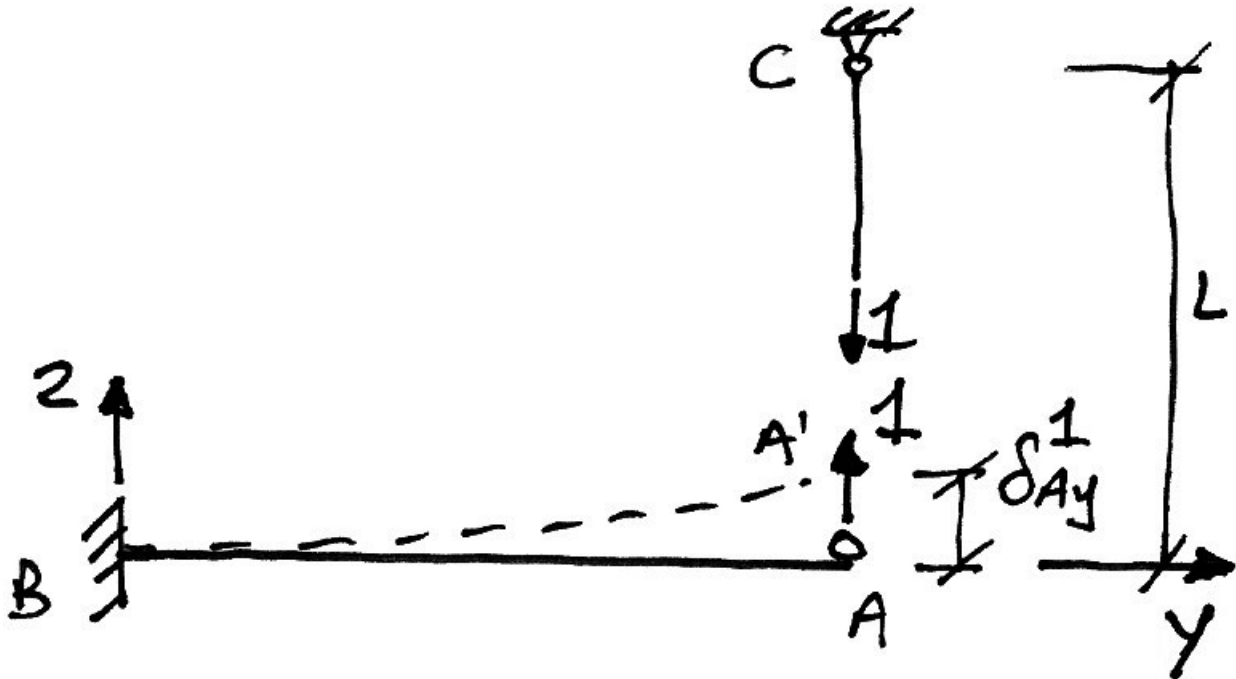
We see that we already know the numerator: the deflection at A in the primary structure, along the line of the redundant (vertical, since the cable is vertical), due to the actual loads on the structure is just the deflection of Example 1:

$$\delta_{Ay}^0 = \frac{wR^4}{EI} \cdot \frac{1}{2} + \frac{wR^4}{GJ} \cdot \frac{(\pi - 2)^2}{8} \quad (38)$$

This is shown below:



Next we need to identify the deflection of the primary structure due to a unit redundant, as shown below:



The components that make up this deflection are:

- Deflection of curved beam caused by unit load (bending and torsion);
- Deflection of the cable AC caused by the unit tension.

The first of these is simply the unit deflection of Example 3, equation (25):

$$\delta_{Ay}^1(\text{beam}) = \frac{1 \cdot R^3}{EI} \cdot \frac{\pi}{4} + \frac{1 \cdot R^3}{GJ} \left(\frac{3\pi - 8}{4} \right) \quad (39)$$

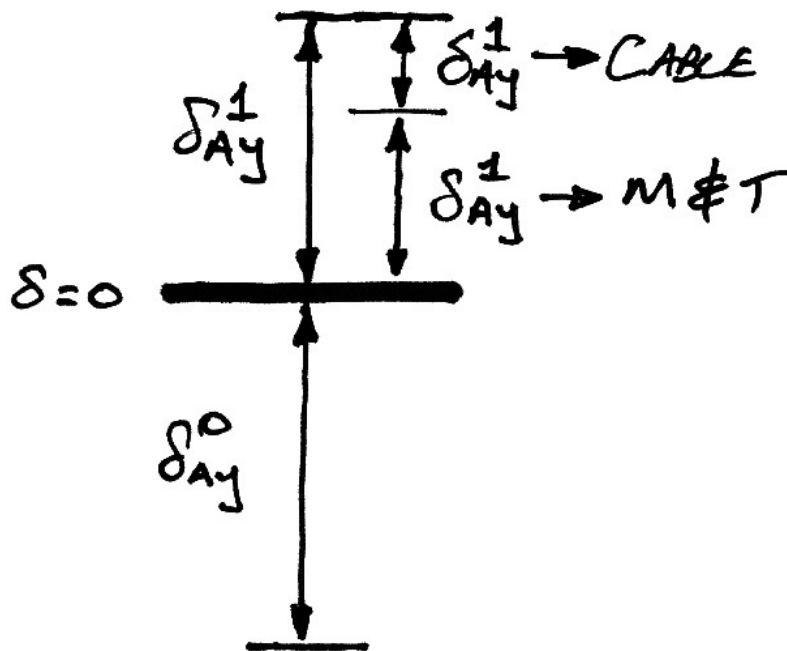
The second of these is not intuitive, but does feature in the virtual work equations, as we shall see. The elongation of the cable due to a unit tension is:

$$\delta_{Ay}^1 (\text{cable}) = \frac{1 \cdot L}{EA} \quad (40)$$

Thus the total deflection along the line of the redundant, of the primary structure, due to a unit redundant is:

$$\begin{aligned} \delta_{Ay}^1 &= \delta_{Ay}^1 (\text{beam}) + \delta_{Ay}^1 (\text{cable}) \\ &= \frac{1 \cdot R^3}{EI} \cdot \frac{\pi}{4} + \frac{1 \cdot R^3}{GJ} \left(\frac{3\pi - 8}{4} \right) + \frac{1 \cdot L}{EA} \end{aligned} \quad (41)$$

Both sets of deflections (equations (39) and (41)) are figuratively summarized as:



And by making $\delta_{Ay}^0 = T \delta_{Ay}^1$, where T is the tension in the cable, we obtain our compatibility equation for the redundant. Thus, from equations (37), (38) and (41) we have:

$$T = \frac{\left[\frac{wR^4}{EI} \cdot \frac{1}{2} + \frac{wR^4}{GJ} \cdot \frac{(\pi - 2)^2}{8} \right]}{\left[\frac{1 \cdot R^3}{EI} \cdot \frac{\pi}{4} + \frac{1 \cdot R^3}{GJ} \left(\frac{3\pi - 8}{4} \right) + \frac{1 \cdot L}{EA} \right]} \quad (42)$$

Setting $\beta = \frac{GJ}{EI}$ and $\gamma = \frac{EA}{EI}$, and performing some algebra gives:

$$\begin{aligned} T &= wR \left[\frac{1}{EI} \cdot \frac{1}{2} + \frac{1}{\beta EI} \cdot \frac{(\pi - 2)^2}{8} \right] \left[\frac{1}{EI} \cdot \frac{\pi}{4} + \frac{1}{\beta EI} \left(\frac{3\pi - 8}{4} \right) + \frac{L}{\gamma R^3 EI} \right]^{-1} \\ &= wR \left[\frac{4\beta + (\pi - 2)^2}{8\beta} \right] \left[\frac{\beta\pi + (3\pi - 8)}{4\beta} + \frac{L}{\gamma R^3} \right]^{-1} \\ &= wR \left[\frac{4\beta + (\pi - 2)^2}{8\beta} \right] \left[\frac{2\beta\pi + 2(3\pi - 8) + \frac{8\beta L}{\gamma R^3}}{8\beta} \right]^{-1} \end{aligned} \quad (43)$$

Which finally gives the required tension as:

$$T = wR \left[4\beta + (\pi - 2)^2 \right] \left[2\pi\beta + 2(3\pi - 8) + 8 \frac{\beta}{\gamma} \cdot \frac{L}{R^3} \right]^{-1} \quad (44)$$

Comparing this result to the previous result, equation (30), for a pinned support at A, we can see that the only difference is the term related to the cable: $8 \frac{\beta}{\gamma} \cdot \frac{L}{R^3}$. Thus the ‘reaction’ (or tension in the cable) at A depends on the relative stiffnesses of the beam and cable (through the $\frac{R^3}{EI}$, $\frac{R^3}{GJ}$ and $\frac{L}{EA}$ terms inherent through γ and β). This dependence on relative stiffness is to be expected.

Formal Virtual Work Approach

Without the use of the insight that equation (37) gives, the more formal application of virtual work will, of course, yield the same result. To calculate the tension in the cable using virtual work, we use the following:

- Equilibrium system: the external and internal virtual forces corresponding to a unit virtual force applied in lieu of the redundant;
- Compatible system: the real external and internal displacements of the original structure subject to the real applied loads.

Thus the virtual work equations are:

$$\begin{aligned}\delta W &= 0 \\ \delta W_E &= \delta W_I \\ \delta_{A_y} \cdot \delta F &= \int \kappa \cdot \delta M \, ds + \int \phi \cdot \delta T \, ds + \sum e \cdot \delta P\end{aligned}\quad (45)$$

In this equation we have accounted for all the major sources of displacement (and thus virtual work). At this point we acknowledge:

- There is no external virtual force applied, only an internal tension, thus $\delta F = 0$;
- The real curvatures and twists are expressed using the real bending moments and torques as $\kappa = \frac{M}{EI}$ and $\phi = \frac{T}{GJ}$ respectively;
- The elongation of the cable is the only source of axial displacement and is written in terms of the real tension in the cable, P , as $e = \frac{PL}{EA}$.

These combine to give, from equation (45):

$$\delta_{A_y} \cdot 0 = \int_0^L \left[\frac{M}{EI} \right] \cdot \delta M \, ds + \int_0^L \left[\frac{T}{GJ} \right] \cdot \delta T \, ds + \frac{PL}{EA} \cdot \delta P \quad (46)$$

As was done in Example 3, using superposition, we write:

$$M = M^0 + \alpha M^1 \quad T = T^0 + \alpha T^1 \quad P = P^0 + \alpha P^1 \quad (47)$$

However, we know that there is no tension in the cable in the primary structure, since it is the cable that is the redundant and is thus removed, hence $P^0 = 0$. Using this and equation (47) in equation (46) gives:

$$0 = \int_0^L \left[\frac{(M^0 + \alpha M^1)}{EI} \right] \cdot \delta M \, ds + \int_0^L \left[\frac{(T^0 + \alpha T^1)}{GJ} \right] \cdot \delta T \, ds + \frac{(\alpha P^1)L}{EA} \cdot \delta P \quad (48)$$

Hence:

$$\begin{aligned} 0 = & \int_0^L \frac{M^0}{EI} \cdot \delta M \, ds + \alpha \cdot \int_0^L \frac{M^1}{EI} \cdot \delta M \, ds \\ & + \int_0^L \frac{T^0}{GJ} \cdot \delta T \, ds + \alpha \cdot \int_0^L \frac{T^1}{GJ} \cdot \delta T \, ds \\ & + \alpha \cdot \frac{P^1 L}{EA} \cdot \delta P \end{aligned} \quad (49)$$

And so finally:

$$\alpha = - \frac{\left[\int_0^L \frac{M^0}{EI} \cdot \delta M \, ds + \int_0^L \frac{T^0}{GJ} \cdot \delta T \, ds \right]}{\left[\int_0^L \frac{M^1}{EI} \cdot \delta M \, ds + \int_0^L \frac{T^1}{GJ} \cdot \delta T \, ds + \frac{P^1 L}{EA} \cdot \delta P \right]} \quad (50)$$

Equation (50) matches equation (35) except for the term relating to the cable. Thus the other four terms are evaluated exactly as per Example 3. The cable term,

$\frac{P^1 L}{EA} \cdot \delta P$, is easily found once it is recognized that $P^1 = \delta P = 1$ as was the case for the moment and torsion in Example 3. With all the terms thus evaluated, equation (50) becomes the same as equation (42) and the solution progresses as before.

The virtual work approach yields the same solution, but without the added insight of the source of each of the terms in equation (50) represented by equation (37).

3.2.5 Example 5

Problem

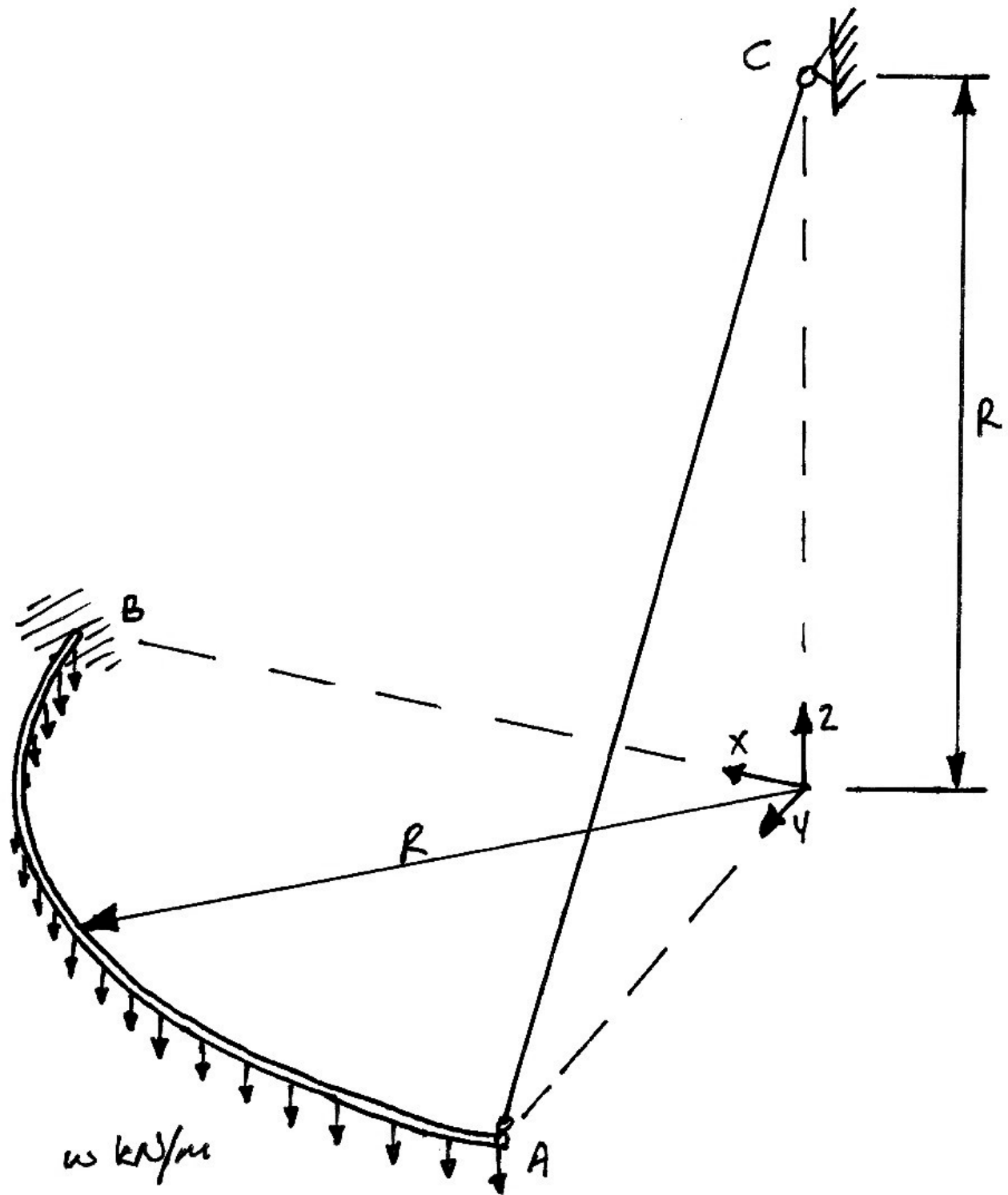
For the structure shown, the quarter-circle beam has the properties:

- torsional rigidity of GJ ;
- flexural rigidity about the local y - y axis EI_y ;
- flexural rigidity about the local z - z axis EI_z .

The cable has axial rigidity EA . Show that the tension in the cable due to the uniformly distributed load, w , shown is:

$$T = wR \left[\frac{4\beta + (\pi - 2)^2}{\beta\sqrt{2}} \right] \left[\pi \left(1 + \frac{1}{\lambda} \right) + \frac{1}{\beta} (3\pi - 8) + \frac{8\sqrt{2}}{\gamma R^2} \right]^{-1}$$

where $\beta = \frac{GJ}{EI_y}$, $\gamma = \frac{EA}{EI_y}$ and $\lambda = \frac{EI_z}{EI_y}$.



Solution

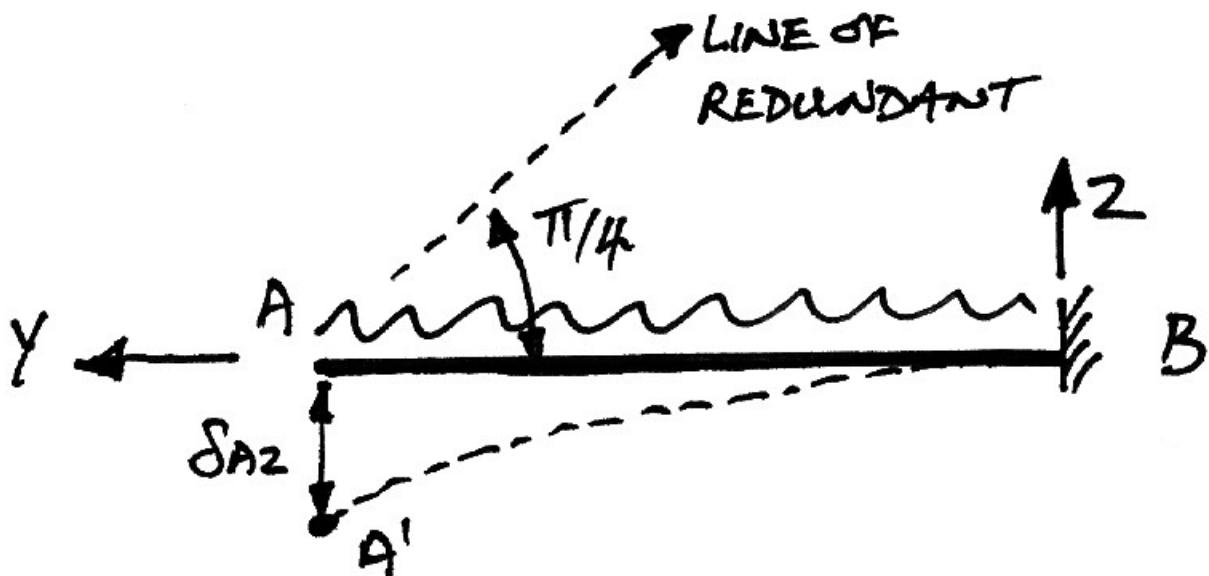
We will carry out this solution using both the empirical and virtual work approaches as was done for Example 4. However, it is in this example that the empirical approach will lead to savings in effort over the virtual work approach, as will be seen.

Empirical Form

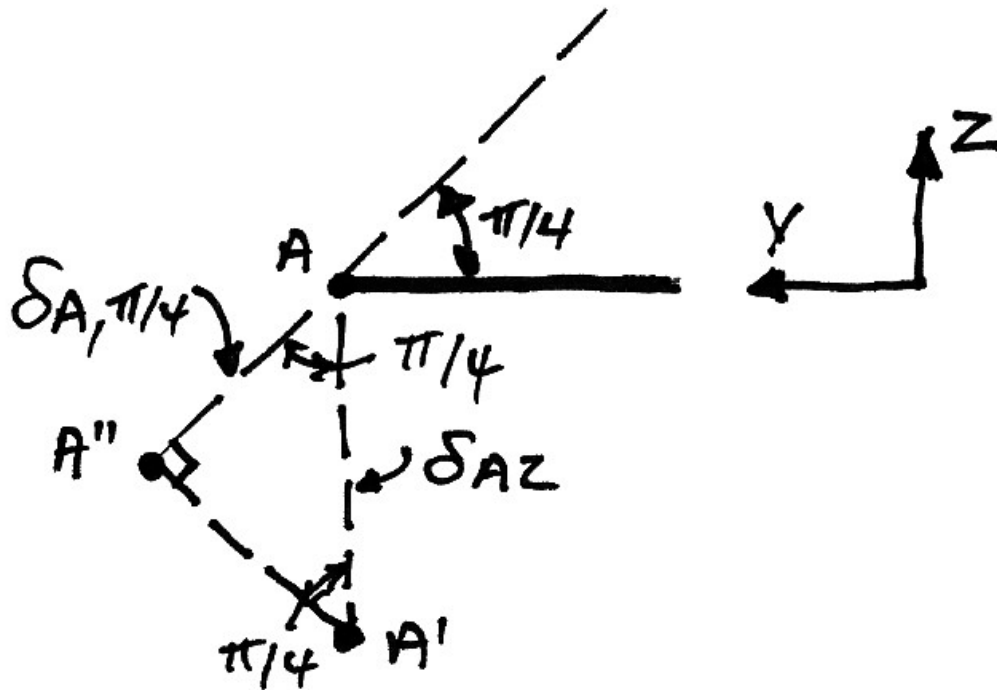
Repeating our empirical equation:

$$\alpha = \frac{\delta \text{ due to actual loads}}{\delta \text{ due to unit redundant}} \left. \vphantom{\frac{\delta \text{ due to actual loads}}{\delta \text{ due to unit redundant}}} \right\} \begin{array}{l} \text{of primary structure along} \\ \text{line of action of redundant} \end{array} \quad (51)$$

We first examine the numerator with the following y - z axis elevation of the primary structure loaded with the actual loads:



Noting that it is the deflection along the line of the redundant that is of interest, we can draw the following:



The deflection δ_{Az} , which is the distance $|AA'|$ is known from Example 2 to be:

$$\delta_{Az} = \frac{wR^4}{EI} \cdot \frac{1}{2} + \frac{wR^4}{GJ} \cdot \frac{(\pi - 2)^2}{8} \quad (52)$$

It is the deflection $|AA''|$ that is of interest here. Since the triangle $A-A'-A''$ is a 1-1- $\sqrt{2}$ triangle, we have:

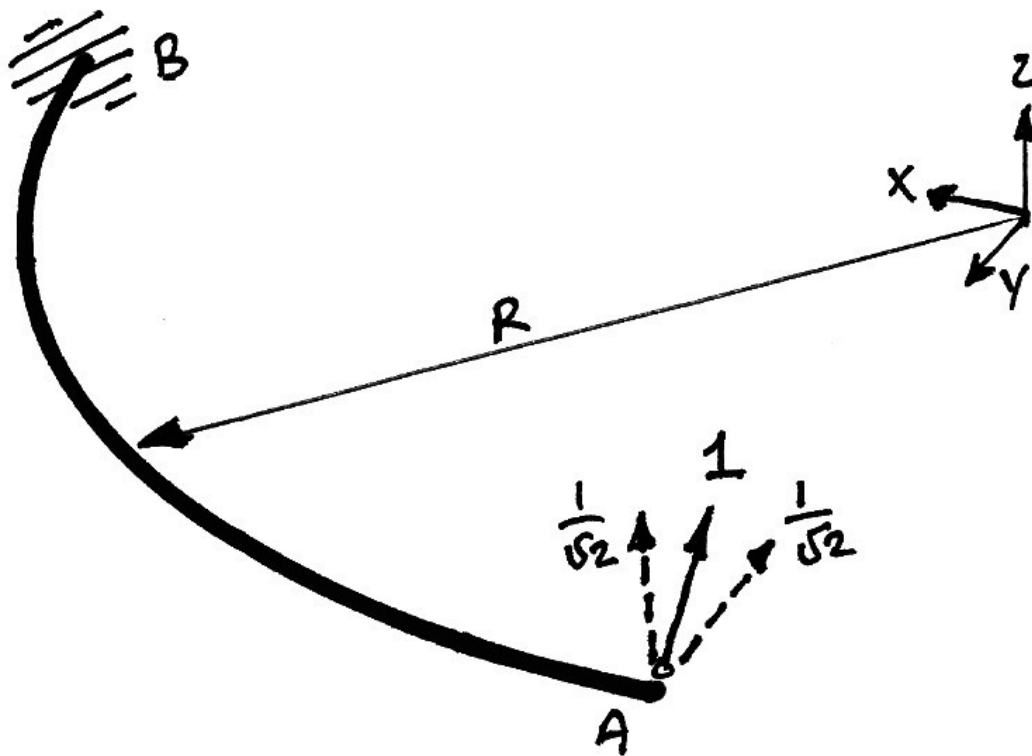
$$\delta_{A, \pi/4} = \frac{\delta_{Az}}{\sqrt{2}} \quad (53)$$

And so the numerator is thus:

$$\delta_A^0 = \frac{wR^4}{2\sqrt{2}EI} + \frac{wR^4}{GJ} \cdot \frac{(\pi - 2)^2}{8\sqrt{2}} \quad (54)$$

To determine the denominator of equation (51) we must apply a unit load in lieu of the redundant (the cable) and determine the deflection in the direction of the cable.

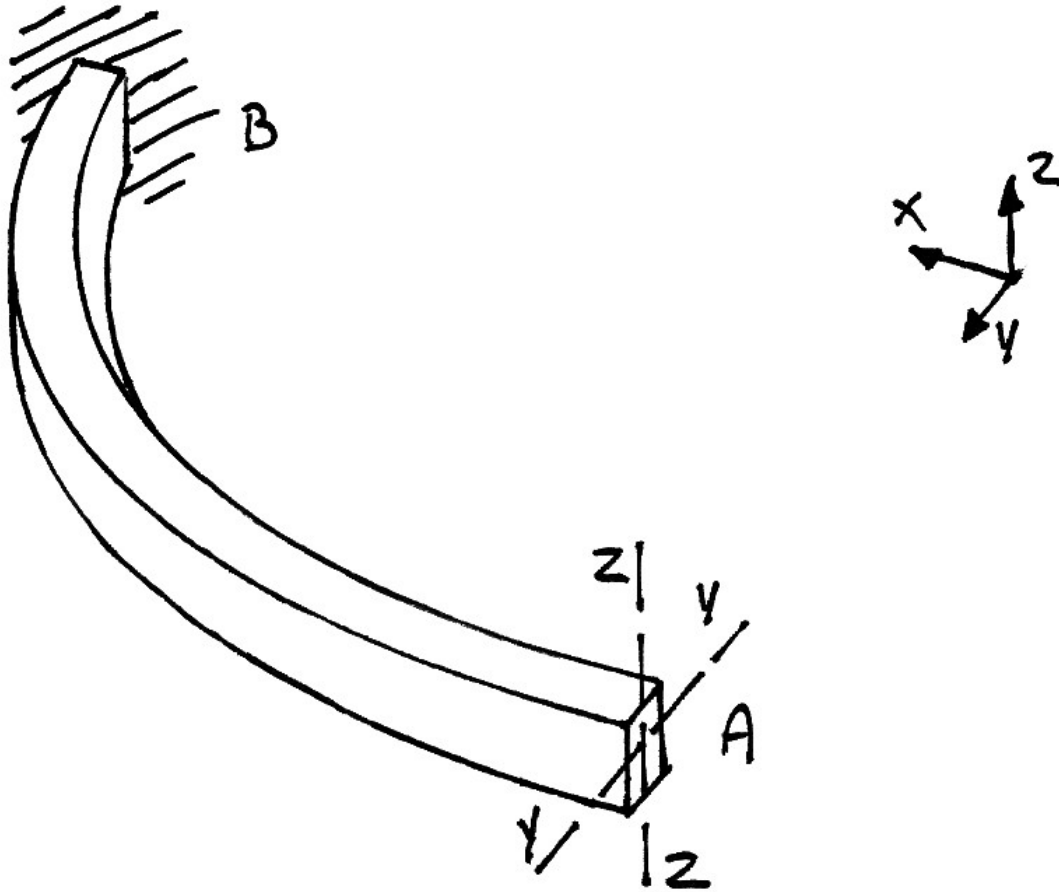
Firstly we will consider the beam. We can determine the deflection in the z - and y -axes separately and combine, by examining the deflections that the components of the unit load cause:



To find the deflection that a force of $\frac{1}{\sqrt{2}}$ causes in the z - and y -axes directions, we will instead find the deflections that unit loads cause in these directions, and then divide by $\sqrt{2}$.

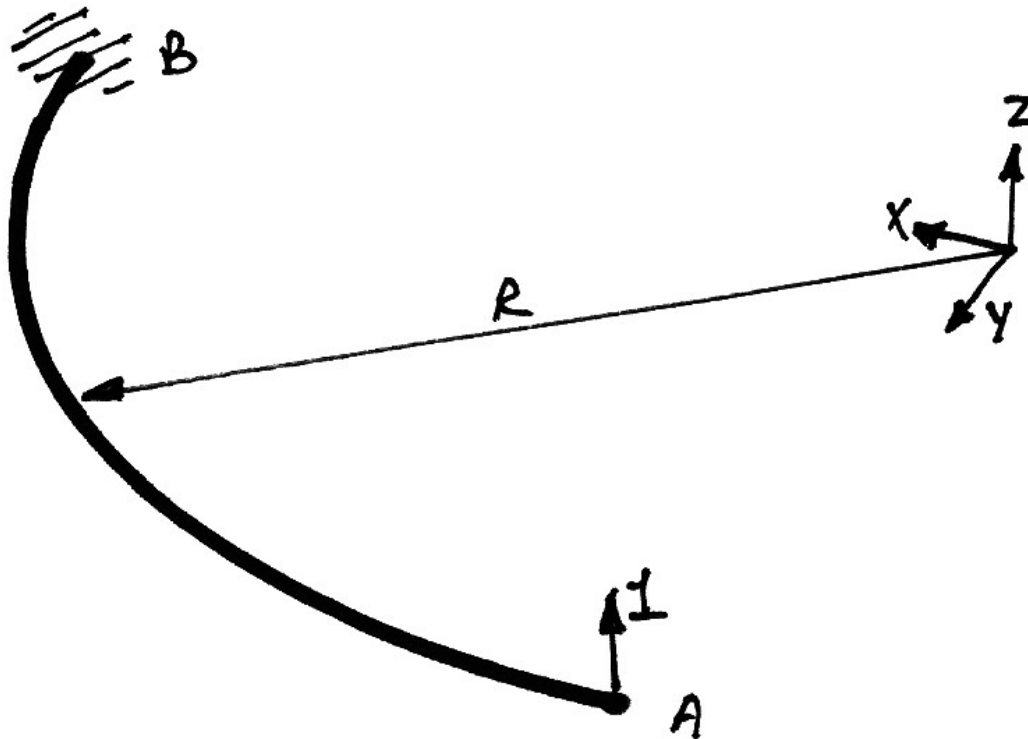
Since we are now calculating deflections in two orthogonal planes of bending, we must consider the different flexural rigidities the beam will have in these two

directions: EI_y for the horizontal plane of bending (vertical loads), and EI_z for loads in the x - y plane, as shown in the figure:

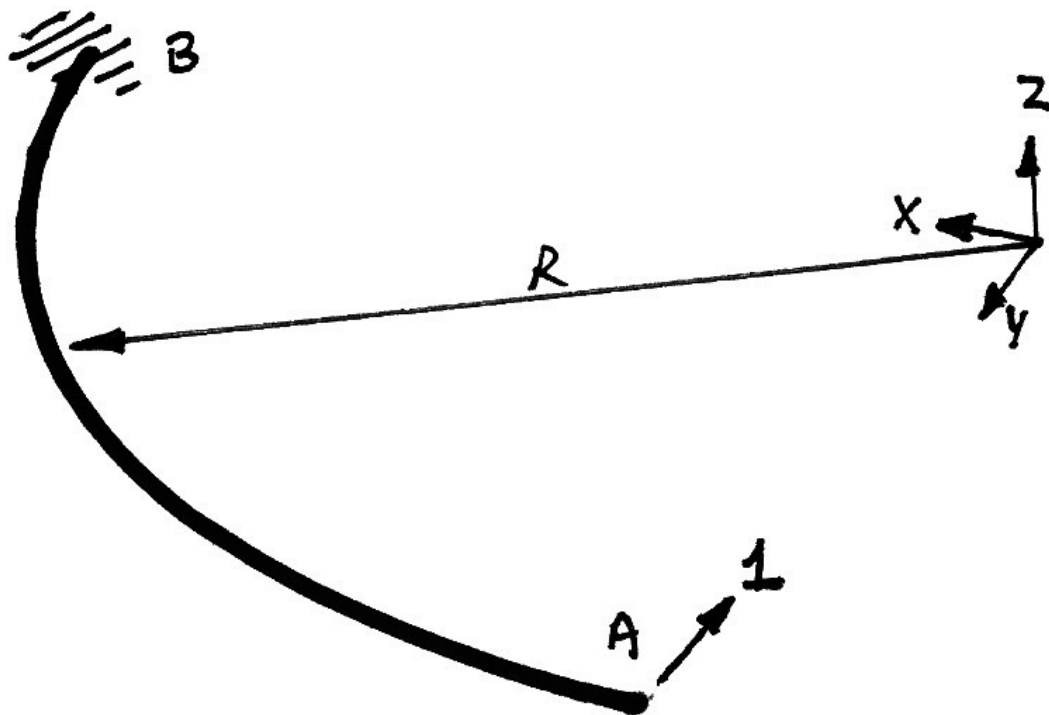


First, consider the deflection at A in the z -direction, caused by a unit load in the z -direction, as shown in the following diagram. This is the same as the deflection calculated in Example 1 and used in later examples:

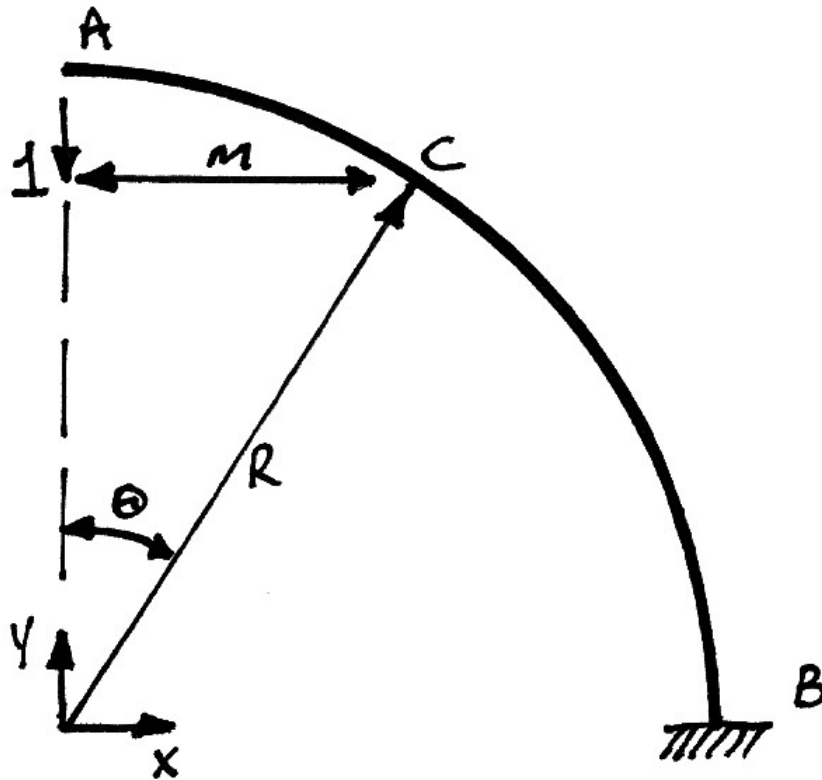
$$\delta_{Az}^1 = \frac{1 \cdot R^3}{EI_y} \cdot \frac{\pi}{4} + \frac{1 \cdot R^3}{GJ} \left(\frac{3\pi - 8}{4} \right) \quad (55)$$



Considering the deflection at A in the y -direction next, we see from the following diagram that we do not have this result to hand, and so must calculate it:



Looking at the elevation of the x - y plane, we have:



The lever arm, m , is:

$$m = R \sin \theta \quad (56)$$

Thus the moment at point C is:

$$M(\theta) = 1 \cdot m = 1 \cdot R \sin \theta \quad (57)$$

Using virtual work:

$$\begin{aligned}
 \delta W &= 0 \\
 \delta W_E &= \delta W_I \\
 1 \cdot \delta_{Ay} &= \int \kappa \cdot \delta M \, ds
 \end{aligned} \tag{58}$$

In which we note that there is no torsion term, as the unit load in the x - y plane does not cause torsion in the structure. Using $\kappa = M/EI_z$ and $ds = R d\theta$:

$$1 \cdot \delta_{Ay} = \int_0^{\pi/2} \frac{M}{EI_z} \delta M R d\theta \tag{59}$$

Since $M = \delta M = R \sin \theta$, and assuming the beam is prismatic, we have:

$$1 \cdot \delta_{Ay} = \frac{R^3}{EI_z} \int_0^{\pi/2} \sin^2 \theta \, d\theta \tag{60}$$

This is the same as the first term in equation (7) and so immediately we obtain the solution as that of the first term of equation (11):

$$\delta_{Ay}^1 = \frac{R^3}{EI_z} \cdot \frac{\pi}{4} \tag{61}$$

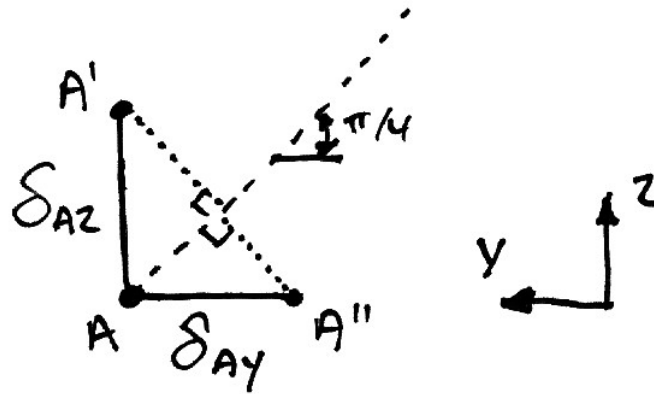
In other words, the bending deflection at A in the x - y plane is the same as that in the z - y plane. This is apparent given that the lever arm is the same in both cases. However, the overall deflections are not the same due to the presence of torsion in the z - y plane.

Now that we have the deflections in the two orthogonal planes due to the units loads, we can determine the deflections in these planes due to the load $\frac{1}{\sqrt{2}}$:

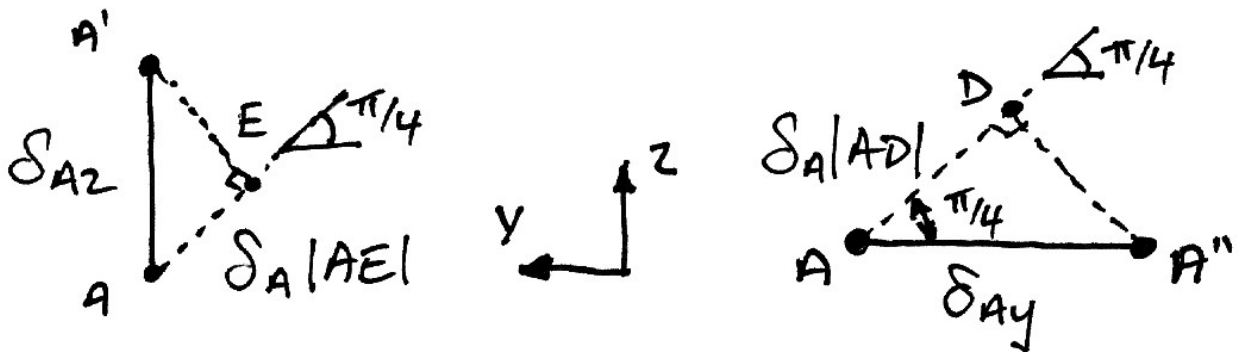
$$\delta_{A_z}^{1/\sqrt{2}} = \frac{R^3}{\sqrt{2}} \left[\frac{1}{EI_y} \cdot \frac{\pi}{4} + \frac{1}{GJ} \left(\frac{3\pi - 8}{4} \right) \right] \quad (62)$$

$$\delta_{A_y}^{1/\sqrt{2}} = \frac{R^3}{\sqrt{2}} \left[\frac{1}{EI_z} \cdot \frac{\pi}{4} \right] \quad (63)$$

The deflection along the line of action of the redundant is what is of interest:



Looking at the contributions of each of these deflections along the line of action of the redundant:



From this we have:

$$\begin{aligned}
\delta_{Az} |AE| &= \frac{1}{\sqrt{2}} \cdot \delta_{Az}^{1/\sqrt{2}} \\
&= \frac{1}{\sqrt{2}} \cdot \frac{R^3}{\sqrt{2}} \left[\frac{1}{EI_y} \cdot \frac{\pi}{4} + \frac{1}{GJ} \left(\frac{3\pi - 8}{4} \right) \right] \\
&= \frac{R^3}{2} \left[\frac{1}{EI_y} \cdot \frac{\pi}{4} + \frac{1}{GJ} \left(\frac{3\pi - 8}{4} \right) \right]
\end{aligned} \tag{64}$$

$$\begin{aligned}
\delta_{Ay} |AD| &= \frac{1}{\sqrt{2}} \delta_{Ay}^{1/\sqrt{2}} \\
&= \frac{1}{\sqrt{2}} \cdot \frac{R^3}{\sqrt{2}} \left[\frac{1}{EI_z} \cdot \frac{\pi}{4} \right] \\
&= \frac{R^3}{2} \left[\frac{1}{EI_z} \cdot \frac{\pi}{4} \right]
\end{aligned} \tag{65}$$

Thus the total deflection along the line of action of the redundant is:

$$\begin{aligned}
\delta_{A,\pi/4}^1 &= \delta_{Az} |AE| + \delta_{Ay} |AD| \\
&= \frac{R^3}{2} \left[\frac{1}{EI_y} \cdot \frac{\pi}{4} + \frac{1}{GJ} \left(\frac{3\pi - 8}{4} \right) \right] + \frac{R^3}{2} \left[\frac{1}{EI_z} \cdot \frac{\pi}{4} \right]
\end{aligned} \tag{66}$$

This gives, finally:

$$\delta_{A,\pi/4}^1 = \frac{R^3}{2} \left[\frac{\pi}{4} \left(\frac{1}{EI_y} + \frac{1}{EI_z} \right) + \frac{1}{GJ} \left(\frac{3\pi - 8}{4} \right) \right] \tag{67}$$

To complete the denominator of equation (51), we must include the deflection that the cable undergoes due to the unit tension that is the redundant:

$$\begin{aligned}
 e &= \frac{1 \cdot L}{EA} \\
 &= \frac{R\sqrt{2}}{EA}
 \end{aligned}
 \tag{68}$$

The relationship between R and L is due to the geometry of the problem – the cable is at an angle of 45° .

Thus the denominator of equation (51) is finally:

$$\delta_{A,\pi/4}^1 = \frac{R^3}{2} \left[\frac{\pi}{4} \left(\frac{1}{EI_y} + \frac{1}{EI_z} \right) + \frac{1}{GJ} \left(\frac{3\pi - 8}{4} \right) + \frac{2\sqrt{2}}{R^2 EA} \right]
 \tag{69}$$

The solution for the tension in the cable becomes, from equations (51), (54) and (69):

$$T = \frac{wR^4 \left[\frac{1}{2\sqrt{2}EI} + \frac{1}{GJ} \cdot \frac{(\pi - 2)^2}{8\sqrt{2}} \right]}{\frac{R^3}{2} \left[\frac{\pi}{4} \left(\frac{1}{EI_y} + \frac{1}{EI_z} \right) + \frac{1}{GJ} \left(\frac{3\pi - 8}{4} \right) + \frac{2\sqrt{2}}{R^2 EA} \right]}
 \tag{70}$$

Using $\beta = \frac{GJ}{EI_y}$, $\gamma = \frac{EA}{EI_y}$ and $\lambda = \frac{EI_z}{EI_y}$, we have:

$$\begin{aligned}
 T &= wR \left[\frac{1}{2\sqrt{2}EI_y} + \frac{1}{\beta EI_y} \cdot \frac{(\pi - 2)^2}{8\sqrt{2}} \right] \\
 &\quad \times \left[\frac{\pi}{8} \left(\frac{1}{EI_y} + \frac{1}{\lambda EI_y} \right) + \frac{1}{\beta EI_y} \left(\frac{3\pi - 8}{8} \right) + \frac{\sqrt{2}}{R^2 \gamma EI_y} \right]^{-1}
 \end{aligned}
 \tag{71}$$

Continuing the algebra:

$$\begin{aligned}
T &= wR \left[\frac{1}{2\sqrt{2}} + \frac{1}{\beta} \cdot \frac{(\pi-2)^2}{8\sqrt{2}} \right] \left[\frac{\pi}{8} \left(1 + \frac{1}{\lambda} \right) + \frac{1}{\beta} \left(\frac{3\pi-8}{8} \right) + \frac{\sqrt{2}}{\gamma R^2} \right]^{-1} \\
&= wR \left[\frac{4\beta + (\pi-2)^2}{8\beta\sqrt{2}} \right] \left[\frac{\pi}{8} \left(1 + \frac{1}{\lambda} \right) + \frac{1}{8\beta} (3\pi-8) + \frac{8\sqrt{2}}{8\gamma R^2} \right]^{-1}
\end{aligned} \tag{72}$$

Which finally gives the desired result:

$$T = wR \left[\frac{4\beta + (\pi-2)^2}{\beta\sqrt{2}} \right] \left[\frac{\pi}{8} \left(1 + \frac{1}{\lambda} \right) + \frac{1}{\beta} (3\pi-8) + \frac{8\sqrt{2}}{\gamma R^2} \right]^{-1} \tag{73}$$

Formal Virtual Work Approach

In the empirical approach carried out above there were some steps that are not obvious. Within a formal application of virtual work we will see how the results of the empirical approach are obtained ‘naturally’.

Following the methodology of the formal virtual work approach of Example 4, we can immediately jump to equation (46):

$$\delta_{A_y} \cdot 0 = \int_0^L \left[\frac{M}{EI} \right] \cdot \delta M \, ds + \int_0^L \left[\frac{T}{GJ} \right] \cdot \delta T \, ds + \frac{PL}{EA} \cdot \delta P \tag{74}$$

For the next step we need to recognize that the unit redundant causes bending about both axes of bending and so the first term in equation (74) must become:

$$\int_0^L \left[\frac{M}{EI} \right] \cdot \delta M \, ds = \int_0^L \left[\frac{M_Y}{EI_Y} \right] \cdot \delta M_Y \, ds + \int_0^L \left[\frac{M_Z}{EI_Z} \right] \cdot \delta M_Z \, ds \tag{75}$$

In which the notation M_Y and M_Z indicate the final bending moments of the actual structure about the Y - Y and Z - Z axes of bending respectively. Again we use superposition for the moments, torques and axial forces:

$$\begin{aligned} M_Y &= M_Y^0 + \alpha M_Y^1 \\ M_Z &= M_Z^0 + \alpha M_Z^1 \\ T &= T^0 + \alpha T^1 \\ P &= P^0 + \alpha P^1 \end{aligned} \quad (76)$$

We do not require more torsion terms since there is only torsion in the z - y plane. With equations (75) and (76), equation (74) becomes:

$$\begin{aligned} 0 &= \int_0^L \left[\frac{(M_Y^0 + \alpha M_Y^1)}{EI_Y} \right] \cdot \delta M_Y ds + \int_0^L \left[\frac{(M_Z^0 + \alpha M_Z^1)}{EI_Z} \right] \cdot \delta M_Z ds \\ &\quad + \int_0^L \left[\frac{(T^0 + \alpha T^1)}{GJ} \right] \cdot \delta T ds + \frac{(P^0 + \alpha P^1)L}{EA} \cdot \delta P \end{aligned} \quad (77)$$

Multiplying out gives:

$$\begin{aligned} 0 &= \int_0^L \frac{M_Y^0}{EI_Y} \cdot \delta M_Y ds + \alpha \cdot \int_0^L \frac{M_Y^1}{EI_Y} \cdot \delta M_Y ds \\ &\quad + \int_0^L \frac{M_Z^0}{EI_Z} \cdot \delta M_Z ds + \alpha \cdot \int_0^L \frac{M_Z^1}{EI_Z} \cdot \delta M_Z ds \\ &\quad + \int_0^L \frac{T^0}{GJ} \cdot \delta T ds + \alpha \cdot \int_0^L \frac{T^1}{GJ} \cdot \delta T ds \\ &\quad + \frac{P^0 L}{EA} \cdot \delta P + \alpha \cdot \frac{P^1 L}{EA} \cdot \delta P \end{aligned} \quad (78)$$

At this point we recognize that some of the terms are zero:

- There is no axial force in the primary structure since the cable is ‘cut’, and so $P^0 = 0$;
- There is no bending in the x - y plane (about the z - z axis of the beam) in the primary structure as the loading is purely vertical, thus $M_z^0 = 0$.

Including these points, and solving for α gives:

$$\alpha = - \frac{\left[\int_0^L \frac{M_Y^0}{EI_Y} \cdot \delta M_Y ds + \int_0^L \frac{T^0}{GJ} \cdot \delta T ds \right]}{\left[\int_0^L \frac{M_Y^1}{EI_Y} \cdot \delta M_Y ds + \int_0^L \frac{M_Z^1}{EI_Z} \cdot \delta M_Z ds + \int_0^L \frac{T^1}{GJ} \cdot \delta T ds + \frac{P^1 L}{EA} \cdot \delta P \right]} \quad (79)$$

We will next examine this expression term-by-term.

$$\frac{\int_0^L \frac{M_Y^0}{EI_Y} \cdot \delta M_Y ds}{}$$

For this term, M_Y^0 are the moments caused by the UDL about the y - y axis of bending, as per equation (13):

$$M_Y^0(\theta) = wR^2(1 - \cos\theta) \quad (80)$$

δM_Y are the moments about the same axis caused by the unit redundant. Since this redundant acts at an angle of 45° to the plane of interest, these moments are caused by its vertical component of $\frac{1}{\sqrt{2}}$. From equation (4), we thus have:

$$\delta M_Y(\theta) = -\frac{1}{\sqrt{2}} R \sin\theta \quad (81)$$

Notice that we have taken it that downwards loading causes positive bending moments. Thus we have:

$$\begin{aligned} \int_0^L \frac{M_Y^0}{EI_Y} \cdot \delta M_Y ds &= \frac{1}{EI_Y} \int_0^L \left[wR^2 (1 - \cos \theta) \right] \left[-\frac{1}{\sqrt{2}} R \sin \theta \right] ds \\ &= -\frac{wR^3}{\sqrt{2}EI_Y} \int_0^{\pi/2} (\sin \theta - \sin \theta \cos \theta) R d\theta \end{aligned} \quad (82)$$

In which we have used the relation $ds = R d\theta$. From the integral appendix we thus have:

$$\begin{aligned} \int_0^L \frac{M_Y^0}{EI_Y} \cdot \delta M_Y ds &= -\frac{wR^4}{\sqrt{2}EI_Y} \left\{ [-\cos \theta]_0^{\pi/2} - \left[-\frac{1}{4} \cos 2\theta \right]_0^{\pi/2} \right\} \\ &= -\frac{wR^3}{\sqrt{2}EI_Y} \left\{ -[(0) - (1)] + \frac{1}{4} [(-1) - (1)] \right\} \end{aligned} \quad (83)$$

And so finally:

$$\int_0^L \frac{M_Y^0}{EI_Y} \cdot \delta M_Y ds = -\frac{wR^4}{2\sqrt{2}EI_Y} \quad (84)$$

$$\underline{\int_0^L \frac{T^0}{GJ} \cdot \delta T ds}$$

The torsion caused by the UDL in the primary structure is the same as that from equation (14):

$$T^0(\theta) = wR^2(\theta - \sin \theta) \quad (85)$$

Similarly to the bending term, the torsion caused by the unit redundant is $\frac{1}{\sqrt{2}}$ that of the unit load of equation (17):

$$\delta T(\theta) = -\frac{1}{\sqrt{2}} R(1 - \cos \theta) \quad (86)$$

Again note that we take the downwards loads as causing positive torsion. Noting $ds = R d\theta$ we thus have:

$$\begin{aligned} \int_0^L \frac{T^0}{GJ} \cdot \delta T ds &= \frac{1}{GJ} \int_0^{\pi/2} [wR^2(\theta - \sin \theta)] \left[-\frac{1}{\sqrt{2}} R(1 - \cos \theta) \right] R d\theta \\ &= -\frac{wR^4}{\sqrt{2}GJ} \int_0^{\pi/2} (\theta - \sin \theta)(1 - \cos \theta) d\theta \end{aligned} \quad (87)$$

This integral is exactly that of the second term in equation (19). Hence we can take its result from equation (20) to give:

$$\int_0^L \frac{T^0}{GJ} \cdot \delta T ds = -\frac{wR^4}{\sqrt{2}GJ} \cdot \frac{(\pi^2 - 2)^2}{8} \quad (88)$$

$$\underline{\int_0^L \frac{M_Y^1}{EI_Y} \cdot \delta M_Y ds}$$

For this term we recognize that $M_Y^1 = \delta M_Y$ and are the moments caused by the $\frac{1}{\sqrt{2}}$ component of the unit redundant in the vertical direction and are thus given by equation (1):

$$\delta M_Y = M_Y^1(\theta) = \frac{1}{\sqrt{2}} R \sin \theta \quad (89)$$

Hence this term becomes:

$$\begin{aligned} \int_0^L \frac{M_Y^1}{EI_Y} \cdot \delta M_Y ds &= \frac{1}{EI_Y} \int_0^{\pi/2} \left[\frac{1}{\sqrt{2}} R \sin \theta \right] \left[\frac{1}{\sqrt{2}} R \sin \theta \right] R d\theta \\ &= \frac{R^3}{2EI_Y} \int_0^{\pi/2} \sin^2 \theta d\theta \end{aligned} \quad (90)$$

From the integral tables we thus have:

$$\begin{aligned} \int_0^L \frac{M_Y^1}{EI_Y} \cdot \delta M_Y ds &= \frac{R^3}{2EI_Y} \left[\frac{\theta}{2} - \frac{1}{4} \sin 2\theta \right]_0^{\pi/2} \\ &= \frac{R^3}{2EI_Y} \left[\left(\frac{\pi}{4} - \frac{1}{4} \cdot 0 \right) - (0 - 0) \right] \end{aligned} \quad (91)$$

And so we finally have:

$$\int_0^L \frac{M_Y^1}{EI_Y} \cdot \delta M_Y ds = \frac{R^3}{EI_Y} \cdot \frac{\pi}{8} \quad (92)$$

$$\int_0^L \frac{M_Z^1}{EI_Z} \cdot \delta M_Z ds$$

Again we recognize that $M_Z^1 = \delta M_Z$ and are the moments caused by the $\frac{1}{\sqrt{2}}$ component of the unit redundant in the x - y plane and are thus given by equation (57).

Hence this term becomes:

$$\int_0^L \frac{M_y^1}{EI_y} \cdot \delta M_y ds = \frac{1}{EI_y} \int_0^{\pi/2} \left[\frac{1}{\sqrt{2}} R \sin \theta \right] \left[\frac{1}{\sqrt{2}} R \sin \theta \right] R d\theta \quad (93)$$

This is the same as equation (90) except for the different flexural rigidity, and so the solution is got from equation (92) to be:

$$\int_0^L \frac{M_z^1}{EI_z} \cdot \delta M_z ds = \frac{R^3}{EI_z} \cdot \frac{\pi}{8} \quad (94)$$

$$\int_0^L \frac{T^1}{GJ} \cdot \delta T ds$$

Once again note that $T^1 = \delta T$ and are the torques caused by the $\frac{1}{\sqrt{2}}$ vertical component of the unit redundant. From equation (2), then we have:

$$\delta T = T^1 = \frac{1}{\sqrt{2}} R(1 - \cos \theta) \quad (95)$$

Thus:

$$\begin{aligned} \int_0^L \frac{T^1}{GJ} \cdot \delta T ds &= \frac{1}{GJ} \int_0^{\pi/2} \left[\frac{1}{\sqrt{2}} R(1 - \cos \theta) \right] \left[\frac{1}{\sqrt{2}} R(1 - \cos \theta) \right] R d\theta \\ &= \frac{R^3}{2GJ} \int_0^{\pi/2} (1 - \cos \theta)^2 d\theta \end{aligned} \quad (96)$$

This integral is that of equation (9) and so the solution is:

$$\int_0^L \frac{T^1}{GJ} \cdot \delta T \, ds = \frac{R^3}{GJ} \left(\frac{3\pi - 8}{8} \right) \quad (97)$$

$$\frac{P^1 L}{EA} \cdot \delta P$$

Lastly then, since $P^1 = \delta P = 1$ and $L = R\sqrt{2}$, this term is easily calculated to be:

$$\frac{P^1 L}{EA} \cdot \delta P = \frac{R\sqrt{2}}{EA} \quad (98)$$

With the values for all terms now worked out, we substitute these values into equation (79) to determine the cable tension:

$$\alpha = - \frac{\left[-\frac{wR^4}{2\sqrt{2}EI_y} - \frac{wR^4}{\sqrt{2}GJ} \cdot \frac{(\pi^2 - 2)^2}{8} \right]}{\left[\frac{R^3}{EI_y} \cdot \frac{\pi}{8} + \frac{R^3}{EI_z} \cdot \frac{\pi}{8} + \frac{R^3}{GJ} \left(\frac{3\pi - 8}{8} \right) + \frac{R\sqrt{2}}{EA} \right]} \quad (99)$$

Cancelling the negatives and re-arranging gives:

$$T = \frac{wR^4 \left[\frac{1}{2\sqrt{2}EI_y} + \frac{1}{GJ} \cdot \frac{(\pi - 2)^2}{8\sqrt{2}} \right]}{\frac{R^3}{2} \left[\frac{\pi}{4} \left(\frac{1}{EI_y} + \frac{1}{EI_z} \right) + \frac{1}{GJ} \left(\frac{3\pi - 8}{4} \right) + \frac{2\sqrt{2}}{R^2 EA} \right]} \quad (100)$$

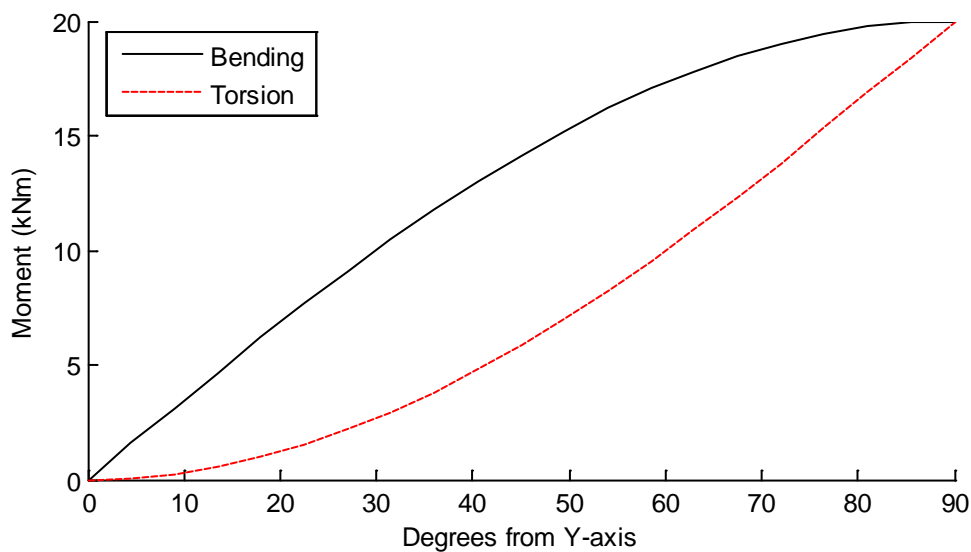
And this is the same as equation (70) and so the solution can proceed as before to obtain the tension in the cable as per equation (73).

Comparison of the virtual work with the empirical form illustrates the interpretation of each of the terms in the virtual work equation that is inherent in the empirical view of such problems.

3.2.6 Review of Examples 1 – 5

Example 1

For a radius of 2 m and a point load of 10 kN, the bending and torsion moment diagrams are:



Using the equations derived in Example 1, the Matlab script for this is:

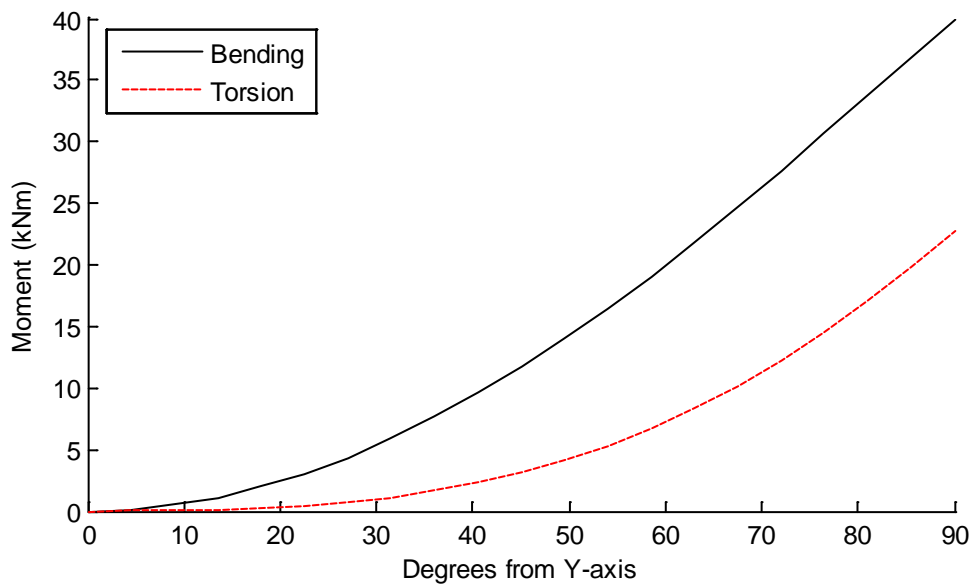
```
function RingBeam_Ex1
% Example 1
R = 2;      % m
P = 10;    % kN

theta = 0:(pi/2)/50:pi/2;
M = P*R*sin(theta);
T = P*R*(1-cos(theta));

hold on;
plot(theta.*180/pi,M,'k-');
plot(theta.*180/pi,T,'r--');
ylabel('Moment (kNm)');
xlabel('Degrees from Y-axis');
legend('Bending','Torsion','location','NW');
hold off;
```

Example 2

For a radius of 2 m and a UDL of 10 kN/m, the bending and torsion moment diagrams are:



Using the equations derived in Example 2, the Matlab script for this is:

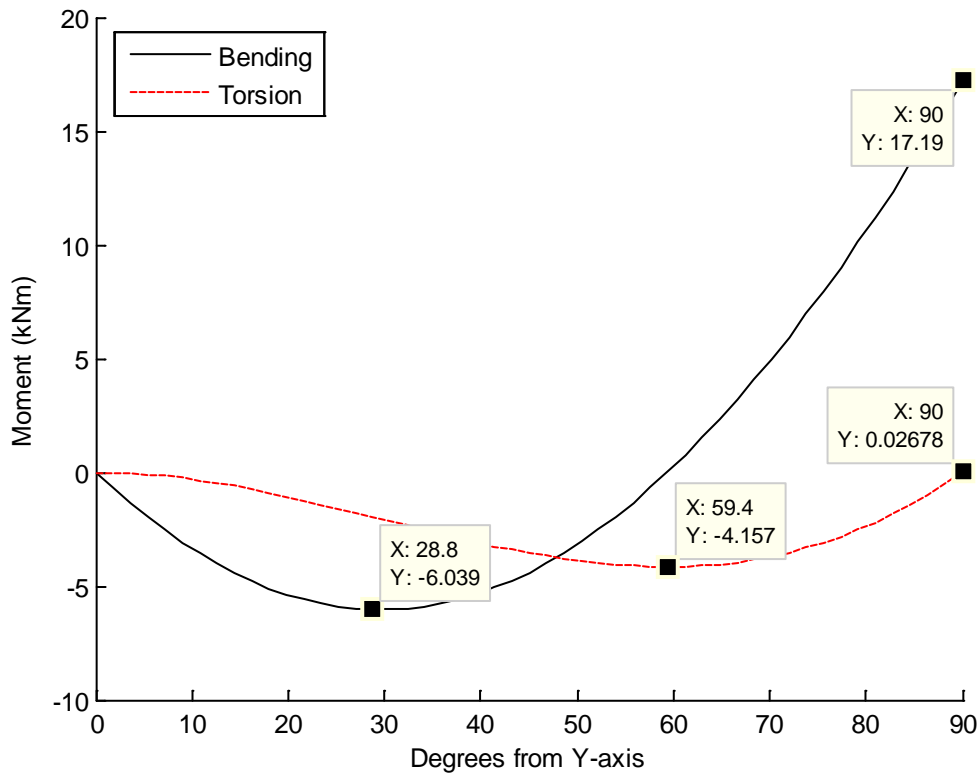
```
function RingBeam_Ex2
% Example 2
R = 2;      % m
w = 10;    % kN/m

theta = 0:(pi/2)/50:pi/2;
M = w*R^2*(1-cos(theta));
T = w*R^2*(theta-sin(theta));

hold on;
plot(theta.*180/pi,M,'k-');
plot(theta.*180/pi,T,'r--');
ylabel('Moment (kNm)');
xlabel('Degrees from Y-axis');
legend('Bending','Torsion','location','NW');
hold off;
```

Example 3

For the parameters given below, the bending and torsion moment diagrams are:



Using the equations derived in Example 3, the Matlab script for this is:

```
function [M T alpha] = RingBeam_Ex3(beta)
% Example 3
R = 2;           % m
w = 10;         % kN/m
I = 2.7e7;      % mm4
J = 5.4e7;      % mm4
E = 205;        % kN/mm2
v = 0.30;       % Poisson's Ratio
G = E/(2*(1+v)); % Shear modulus
EI = E*I/1e6;   % kNm2
GJ = G*J/1e6;   % kNm2
if nargin < 1
    beta = GJ/EI; % Torsion stiffness ratio
end

alpha = w*R*(4*beta+(pi-2)^2)/(2*beta*pi+2*(3*pi-8));

theta = 0:(pi/2)/50:pi/2;
```

```

M0 = w*R^2*(1-cos(theta));
T0 = w*R^2*(theta-sin(theta));
M1 = -R*sin(theta);
T1 = -R*(1-cos(theta));

M = M0 + alpha.*M1;
T = T0 + alpha.*T1;

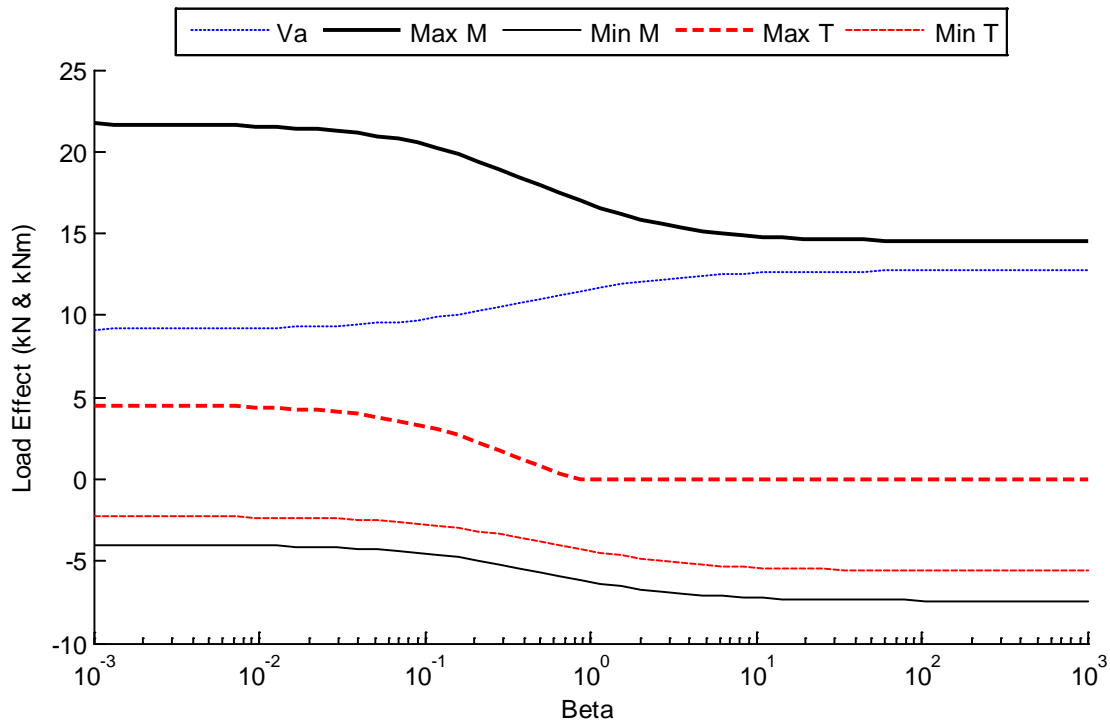
if nargin < 1
    hold on;
    plot(theta.*180/pi,M,'k-');
    plot(theta.*180/pi,T,'r--');
    ylabel('Moment (kNm)');
    xlabel('Degrees from Y-axis');
    legend('Bending','Torsion','location','NW');
    hold off;
end

```

The vertical reaction at A is found to be 11.043 kN. Note that the torsion is (essentially) zero at support B . Other relevant values for bending moment and torsion are given in the graph.

By changing β , we can examine the effect of the relative stiffnesses on the vertical reaction at A , and consequently the bending moments and torsions. In the following plot, the reaction at A and the maximum and minimum bending and torsion moments are given for a range of β values.

Very small values of β reflect little torsional rigidity and so the structure movements will be dominated by bending solely. Conversely, large values of β reflect structures with small bending stiffness in comparison to torsional stiffness. At either extreme the variables converge to asymptotes of extreme behaviour. For $0.1 \leq \beta \leq 10$ the variables are sensitive to the relative stiffnesses. Of course, this reflects the normal range of values for β .



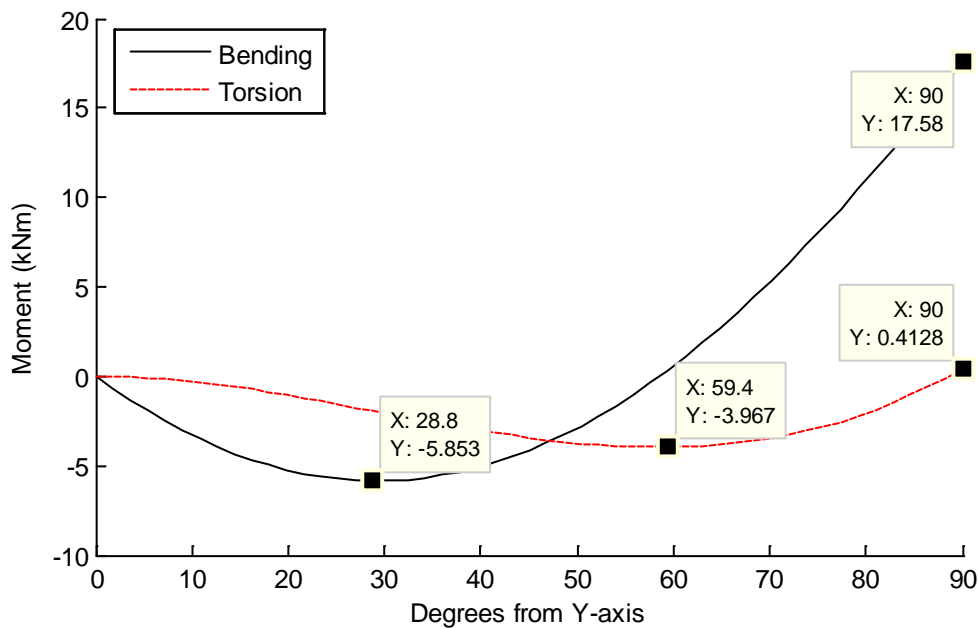
The Matlab code to produce this figure is:

```
% Variation with Beta
beta = logspace(-3,3);
n = length(beta);
for i = 1:n
    [M T alpha] = RingBeam_Ex3(beta(i));
    Eff(i,1) = alpha;
    Eff(i,2) = max(M);
    Eff(i,3) = min(M);
    Eff(i,4) = max(T);
    Eff(i,5) = min(T);
end

hold on;
plot(beta, Eff(:,1), 'b:');
plot(beta, Eff(:,2), 'k-', 'LineWidth', 2);
plot(beta, Eff(:,3), 'k-');
plot(beta, Eff(:,4), 'r--', 'LineWidth', 2);
plot(beta, Eff(:,5), 'r--');
hold off;
set(gca, 'xscale', 'log');
legend('Va', 'Max M', 'Min M', 'Max T', 'Min T', 'Location', 'NO', ...
    'Orientation', 'horizontal');
xlabel('Beta');
ylabel('Load Effect (kN & kNm)');
```

Example 4

For a 20 mm diameter cable, and for the other parameters given below, the bending and torsion moment diagrams are:



The values in the graph should be compared to those of Example 3, where the support was rigid. The Matlab script, using Example 4's equations, for this problem is:

```
function [M T alpha] = RingBeam_Ex4(gamma,beta)
% Example 4
R = 2;           % m - radius of beam
L = 2;           % m - length of cable
w = 10;          % kN/m - UDL
A = 314;         % mm2 - area of cable
I = 2.7e7;       % mm4
J = 5.4e7;       % mm4
E = 205;         % kN/mm2
v = 0.30;        % Poisson's Ratio
G = E/(2*(1+v)); % Shear modulus
EA = E*A;        % kN - axial stiffness
EI = E*I/1e6;    % kNm2
GJ = G*J/1e6;    % kNm2
if nargin < 2
    beta = GJ/EI; % Torsion stiffness ratio
end
if nargin < 1
    gamma = EA/EI; % Axial stiffness ratio
end
```

```

alpha = w*R*(4*beta+(pi-2)^2)/(2*beta*pi+2*(3*pi-8)+8*(beta/gamma)*(L/R^3));

theta = 0:(pi/2)/50:pi/2;
M0 = w*R^2*(1-cos(theta));
T0 = w*R^2*(theta-sin(theta));
M1 = -R*sin(theta);
T1 = -R*(1-cos(theta));

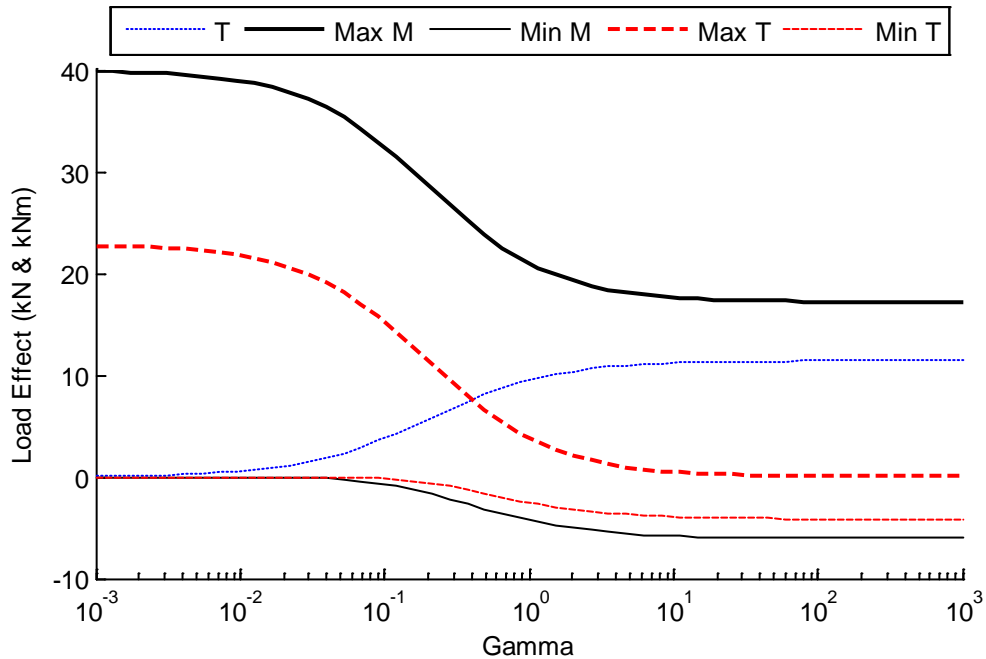
M = M0 + alpha.*M1;
T = T0 + alpha.*T1;

if nargin < 1
    hold on;
    plot(theta.*180/pi,M,'k-');
    plot(theta.*180/pi,T,'r--');
    ylabel('Moment (kNm)');
    xlabel('Degrees from Y-axis');
    legend('Bending','Torsion','location','NW');
    hold off;
end

```

Whilst keeping the β constant, we can examine the effect of varying the cable stiffness on the behaviour of the structure, by varying γ . Again we plot the reaction at A and the maximum and minimum bending and torsion moments for the range of γ values.

For small γ , the cable has little stiffness and so the primary behaviour will be that of Example 1, where the beam was a pure cantilever. Conversely for high γ , the cable is very stiff and so the beam behaves as in Example 3, where there was a pinned support at A. Compare the maximum (hogging) bending moments for these two cases with the graph. Lastly, for $0.01 \leq \gamma \leq 3$, the cable and beam interact and the variables are sensitive to the exact ratio of stiffness. Typical values in practice are towards the lower end of this region.



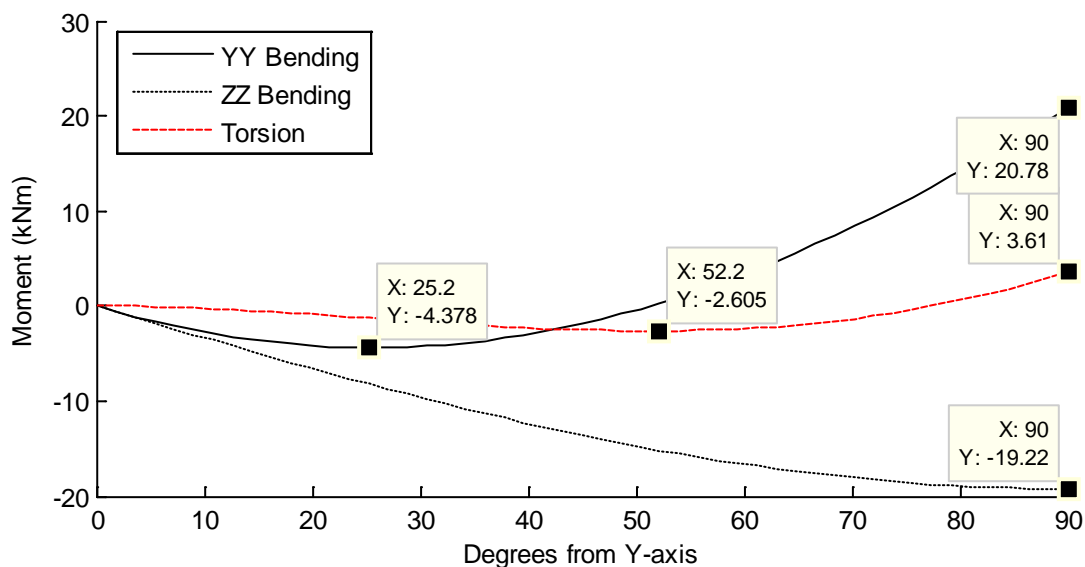
The Matlab code for this plot is:

```
% Variation with Gamma
gamma = logspace(-3,3);
n = length(gamma);
for i = 1:n
    [M T alpha] = RingBeam_Ex4(gamma(i));
    Eff(i,1) = alpha;
    Eff(i,2) = max(M);
    Eff(i,3) = min(M);
    Eff(i,4) = max(T);
    Eff(i,5) = min(T);
end

hold on;
plot(gamma, Eff(:,1), 'b:');
plot(gamma, Eff(:,2), 'k-', 'LineWidth', 2);
plot(gamma, Eff(:,3), 'k-');
plot(gamma, Eff(:,4), 'r--', 'LineWidth', 2);
plot(gamma, Eff(:,5), 'r--');
hold off;
set(gca, 'xscale', 'log');
legend('T', 'Max M', 'Min M', 'Max T', 'Min T', 'Location', 'NO', ...
    'Orientation', 'horizontal');
xlabel('Gamma');
ylabel('Load Effect (kN & kNm)');
```

Example 5

Again we consider a 20 mm diameter cable, and a doubly symmetric section, that is $EI_Y = EI_Z$. For the parameters below the bending and torsion moment diagrams are:



The values in the graph should be compared to those of Example 4, where the cable was vertical. The Matlab script, using Example 5's equations, for this problem is:

```
function [My T alpha] = RingBeam_Ex5(lamda, gamma, beta)
% Example 5
R = 2;           % m - radius of beam
w = 10;         % kN/m - UDL
A = 314;        % mm2 - area of cable
Iy = 2.7e7;     % mm4
Iz = 2.7e7;     % mm4
J = 5.4e7;     % mm4
E = 205;       % kN/mm2
v = 0.30;     % Poisson's Ratio
G = E/(2*(1+v)); % Shear modulus
EA = E*A;     % kN - axial stiffness
EIy = E*Iy/1e6; % kNm2
EIz = E*Iz/1e6; % kNm2
GJ = G*J/1e6; % kNm2
if nargin < 3
    beta = GJ/EIy; % Torsion stiffness ratio
end
if nargin < 2
    gamma = EA/EIy; % Axial stiffness ratio
end
if nargin < 1
```

```

    lamda = EIy/EIz;      % Bending stiffness ratio
end

numerator = (4*beta+(pi-2)^2)/(beta*sqrt(2));
denominator = (pi*(1+1/lamda)+(3*pi-8)/beta+8*sqrt(2)/(gamma*R^2));
alpha = w*R*numerator/denominator;

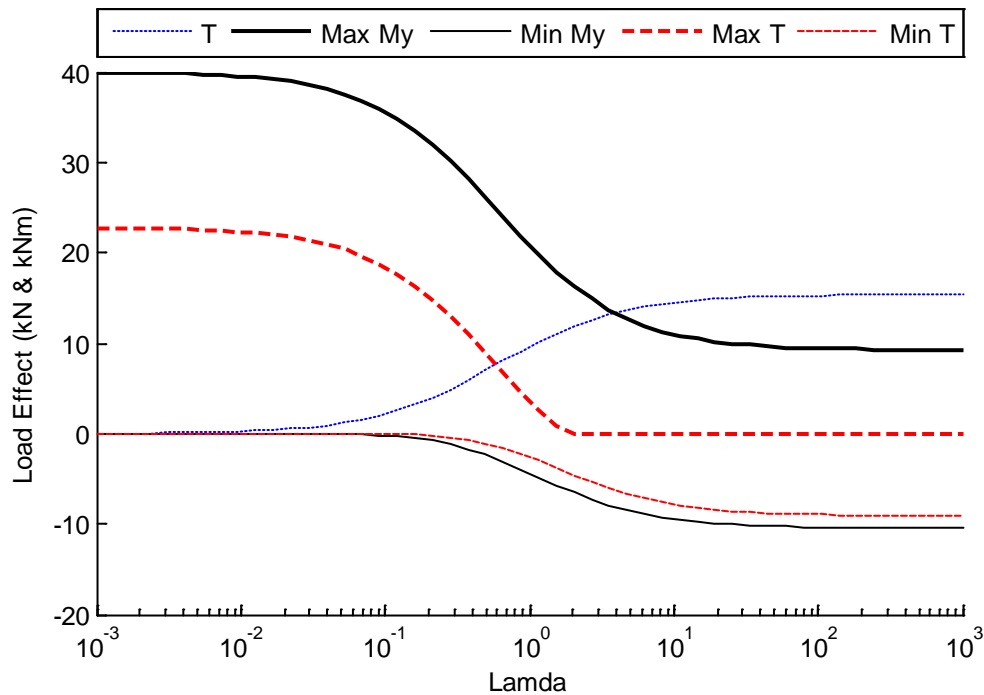
theta = 0:(pi/2)/50:pi/2;
M0y = w*R^2*(1-cos(theta));
M0z = 0;
T0 = w*R^2*(theta-sin(theta));
Mly = -R*sin(theta);
Mlz = -R*sin(theta);
Tl = -R*(1-cos(theta));

My = M0y + alpha.*Mly;
Mz = M0z + alpha.*Mlz;
T = T0 + alpha.*Tl;

if nargin < 1
    hold on;
    plot(theta.*180/pi,My,'k');
    plot(theta.*180/pi,Mz,'k:');
    plot(theta.*180/pi,T,'r--');
    ylabel('Moment (kNm)');
    xlabel('Degrees from Y-axis');
    legend('YY Bending','ZZ Bending','Torsion','location','NW');
    hold off;
end

```

Keep all parameters constant, but varying the ratio of the bending rigidities by changing λ , the output variables are as shown below. For low λ (a tall slender beam) the beam behaves as a cantilever. Thus the cable requires some transverse bending stiffness to be mobilized. With high λ (a wide flat beam) the beam behaves as if supported at A with a vertical roller. Only vertical movement takes place, and the effect of the cable is solely its vertical stiffness at A. Usually $0.1 \leq \lambda \leq 2$ which means that the output variables are usually quite sensitive to the input parameters.



The Matlab code to produce this graph is:

```
% Variation with Lamda
lamda = logspace(-3,3);
n = length(lamda);
for i = 1:n
    [My T alpha] = RingBeam_Ex5(lamda(i));
    Eff(i,1) = alpha;
    Eff(i,2) = max(My);
    Eff(i,3) = min(My);
    Eff(i,4) = max(T);
    Eff(i,5) = min(T);
end

hold on;
plot(lamda, Eff(:,1), 'b:');
plot(lamda, Eff(:,2), 'k-', 'LineWidth', 2);
plot(lamda, Eff(:,3), 'k-');
plot(lamda, Eff(:,4), 'r--', 'LineWidth', 2);
plot(lamda, Eff(:,5), 'r--');
hold off;
set(gca, 'xscale', 'log');
legend('T', 'Max My', 'Min My', 'Max T', 'Min T', 'Location', 'NO', ...
    'Orientation', 'horizontal');
xlabel('Lamda');
ylabel('Load Effect (kN & kNm)');
```

3.3 Grid Examples

3.3.1 Example 1

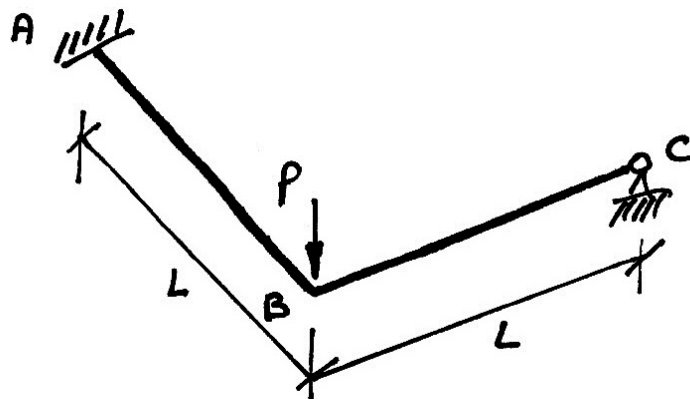
Problem

For the grid structure shown, which has flexural and torsional rigidities of EI and GJ respectively, show that the vertical reaction at C is given by:

$$V_c = P \left(\frac{1}{2 + 3\beta} \right)$$

Where

$$\beta = \frac{EI}{GJ}$$

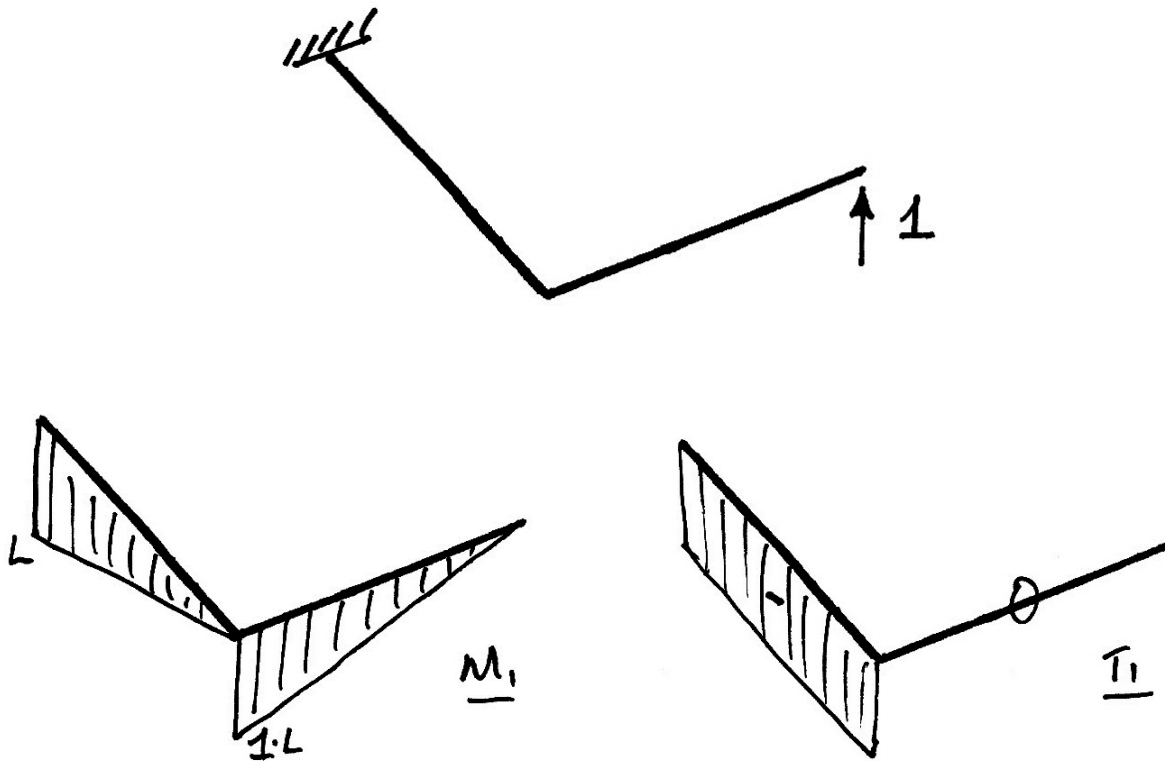


Solution

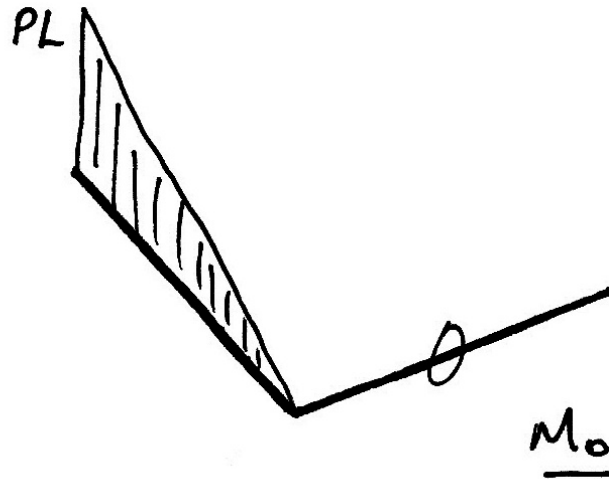
Using virtual work, we have:

$$\begin{aligned}\delta W &= 0 \\ \delta W_E &= \delta W_I & (101) \\ 0 &= \int \frac{M}{EI} \cdot \delta M \, ds + \int \frac{T}{GJ} \cdot \delta T \, ds\end{aligned}$$

Choosing the vertical reaction at C as the redundant gives the following diagrams:



And the free bending moment diagram is:



But the superposition gives:

$$M = M_0 + \alpha M_1 \quad (102)$$

$$T = T_0 + \alpha T_1 \quad (103)$$

Substituting, we get:

$$0 = \int \frac{(M_0 + \alpha M_1)}{EI} \cdot \delta M \, ds + \int \frac{(T_0 + \alpha T_1)}{GJ} \cdot \delta T \, ds \quad (104)$$

$$\int \frac{M_0 M_1}{EI} \, ds + \alpha \int \frac{M_1^2}{EI} \, ds + \int \frac{T_0 T_1}{GJ} \, ds + \alpha \int \frac{T_1^2}{GJ} \, ds = 0 \quad (105)$$

$$\int \frac{M_0 M_1}{EI} \, ds + \alpha \int \frac{M_1^2}{EI} \, ds + \int \frac{T_0 T_1}{GJ} \, ds + \alpha \int \frac{T_1^2}{GJ} \, ds = 0 \quad (106)$$

Taking the beam to be prismatic, and $\beta = \frac{EI}{GJ}$ gives:

$$\int M_0 M_1 \, ds + \alpha \int M_1^2 \, ds + \beta \int T_0 T_1 \, ds + \alpha \beta \int T_1^2 \, ds = 0 \quad (107)$$

From which:

$$\alpha = -\frac{\left[\int M_0 M_1 ds + \beta \int T_0 T_1 ds \right]}{\left[\int M_1^2 ds + \beta \int T_1^2 ds \right]} \quad (108)$$

From the various diagrams and volume integrals tables, the terms evaluate to:

$$\begin{aligned} \int M_0 M_1 ds &= -\frac{1}{3}(L)(PL)(L) = -\frac{PL^3}{3} \\ \beta \int T_0 T_1 ds &= \beta(0) = 0 \\ \int M_1^2 ds &= 2\left(\frac{1}{3}\right)(L)(L)(L) = \frac{2}{3}L^3 \\ \beta \int T_1^2 ds &= \beta(L)(L)(L) = \beta L^3 \end{aligned} \quad (109)$$

Substituting gives:

$$\begin{aligned} \alpha &= -\frac{\left[-\frac{PL^3}{3} + 0 \right]}{\left[\frac{2}{3}L^3 + \beta L^3 \right]} \\ &= \frac{PL^3}{3} \cdot \frac{1}{L^3} \cdot \frac{1}{\left(\frac{2}{3} + \beta\right)} \end{aligned} \quad (110)$$

Which yields:

$$\alpha \equiv V_c = P \left(\frac{1}{2 + 3\beta} \right) \quad (111)$$

Numerical Example

Using a 200×400 mm deep rectangular concrete section, gives the following:

$$I = 1.067 \times 10^3 \text{ m}^4 \quad J = 0.732 \times 10^3 \text{ m}^4$$

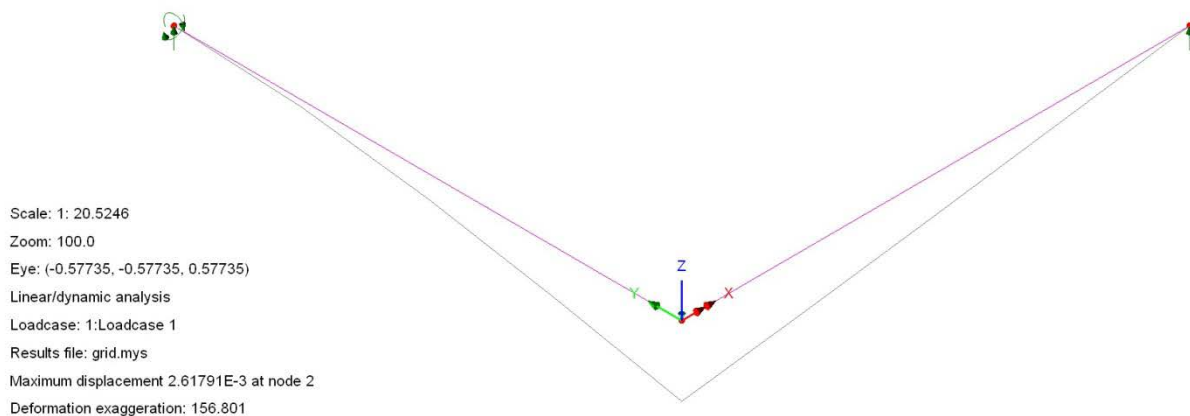
The material model used is for a 50N concrete with:

$$E = 30 \text{ kN/mm}^2 \quad \nu = 0.2$$

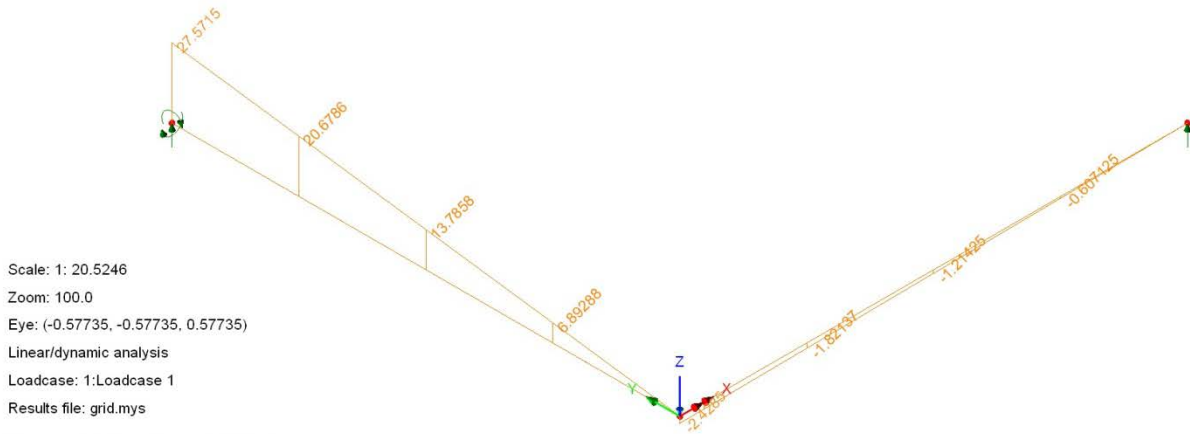
Using the elastic relation, we have:

$$G = \frac{E}{2(1+\nu)} = \frac{30 \times 10^6}{2(1+0.2)} = 12.5 \times 10^6 \text{ kN/m}^2$$

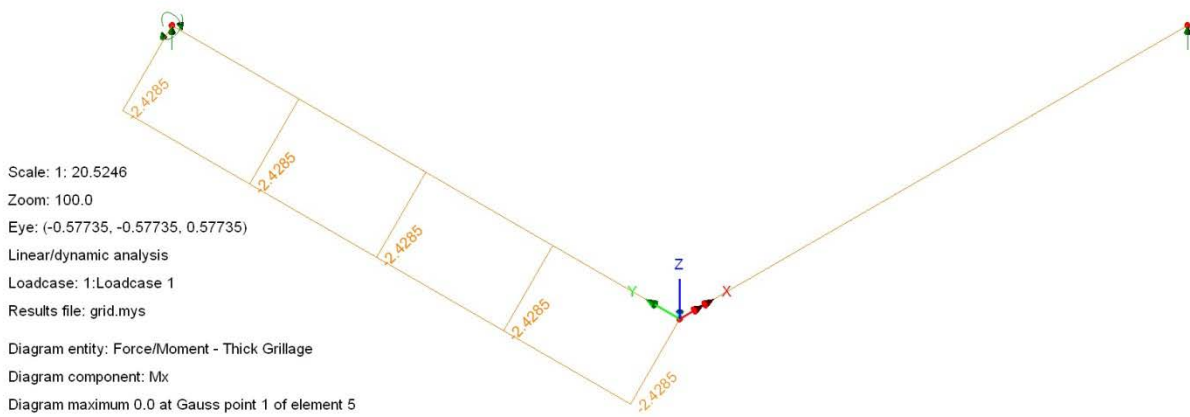
From the model, LUSAS gives: $V_c = 0.809 \text{ kN}$. Other results follow.



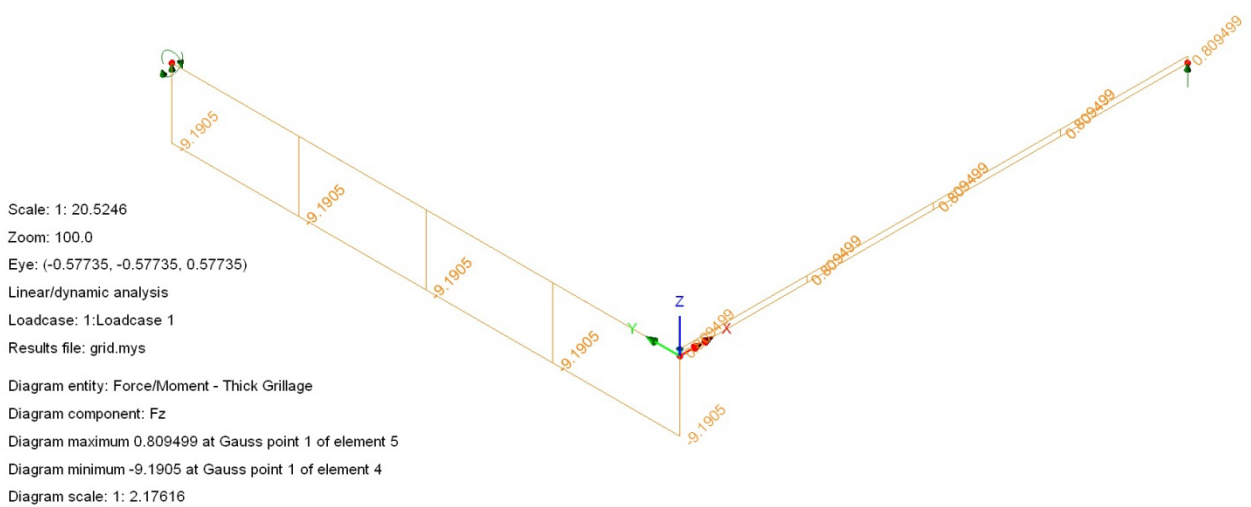
Deflected Shape



Bending Moment Diagram



Torsion Moment Diagram



Shear Force Diagram

3.3.2 Example 2

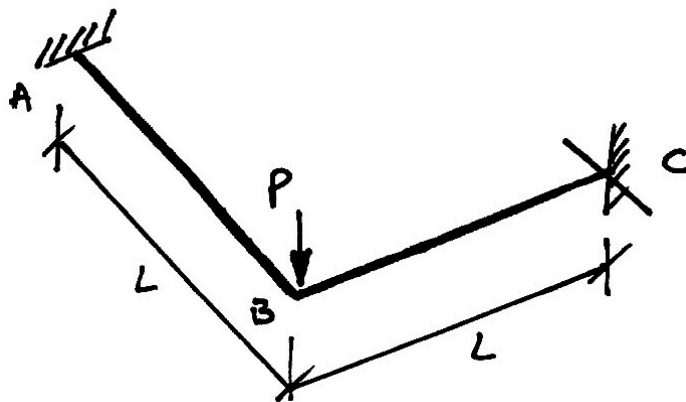
Problem

For the grid structure shown, which has flexural and torsional rigidities of EI and GJ respectively, show that the reactions at C are given by:

$$V_c = P \left(\frac{4\beta + 4}{8\beta + 5} \right) \quad M_c = PL \left(\frac{4\beta + 2}{8\beta + 5} \right)$$

Where

$$\beta = \frac{EI}{GJ}$$



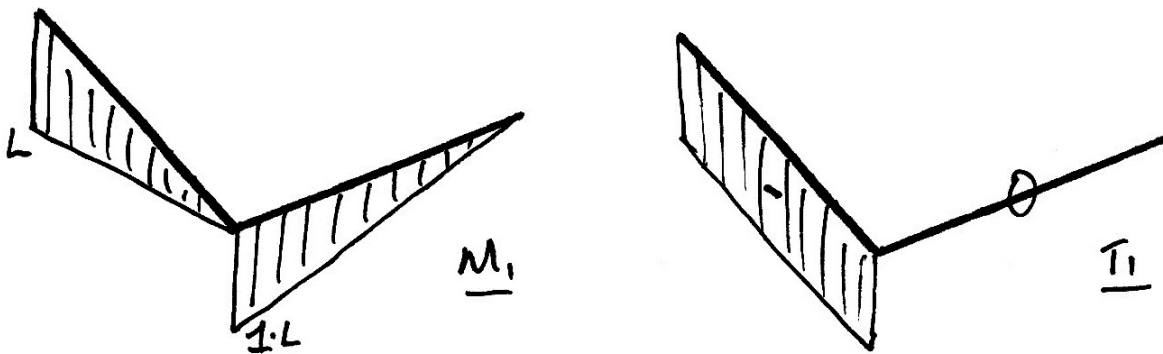
(Note that the support symbol at C indicates a moment and vertical support at C , but no torsional restraint.)

Solution

The general virtual work equations are:

$$\begin{aligned}\delta W &= 0 \\ \delta W_E &= \delta W_I \\ 0 &= \int \frac{M}{EI} \cdot \delta M \, ds + \int \frac{T}{GJ} \cdot \delta T \, ds\end{aligned}\quad (112)$$

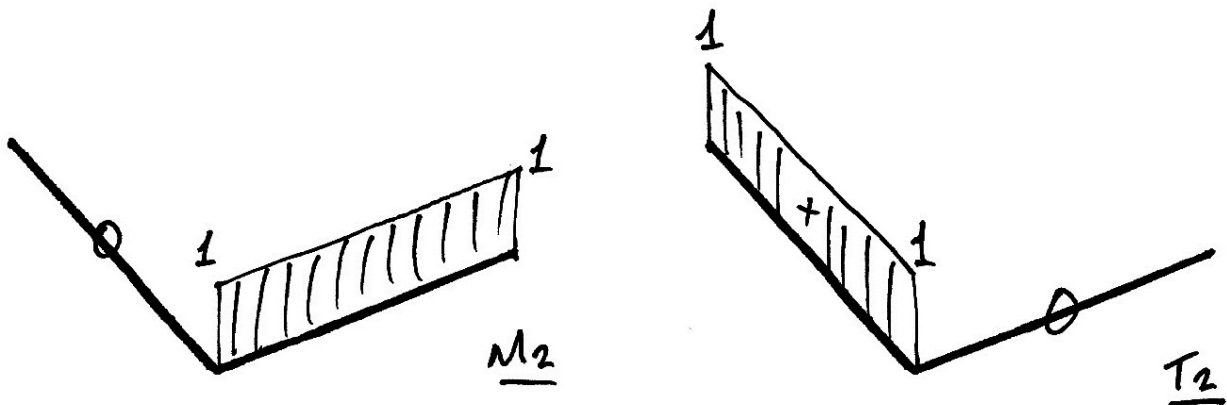
We choose the moment and vertical restraints at C as the redundants. The vertical redundant gives the same diagrams as before:



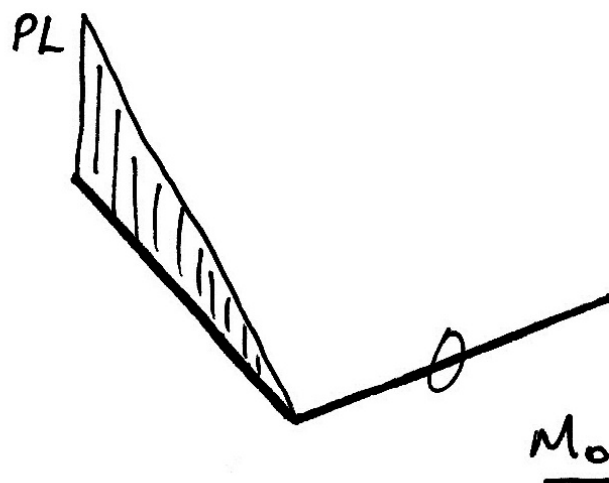
And, for the moment restraint, we apply a unit moment:



Which yields the following:



Again the free bending moment diagram is:



Since there are two redundants, there are two possible equilibrium sets to use as the virtual moments and torques. Thus there are two equations that can be used:

$$0 = \int \frac{M}{EI} \cdot M_1 ds + \int \frac{T}{GJ} \cdot T_1 ds \quad (113)$$

$$0 = \int \frac{M}{EI} \cdot M_2 ds + \int \frac{T}{GJ} \cdot T_2 ds \quad (114)$$

Superposition gives:

$$M = M_0 + \alpha_1 M_1 + \alpha_2 M_2 \quad (115)$$

$$T = T_0 + \alpha_1 T_1 + \alpha_2 T_2 \quad (116)$$

Substituting, we get from equation (113):

$$0 = \int \frac{(M_0 + \alpha_1 M_1 + \alpha_2 M_2)}{EI} \cdot M_1 ds + \int \frac{(T_0 + \alpha_1 T_1 + \alpha_2 T_2)}{GJ} \cdot T_1 ds \quad (117)$$

$$\begin{aligned} & \int \frac{M_0 M_1}{EI} ds + \alpha_1 \int \frac{M_1^2}{EI} ds + \alpha_2 \int \frac{M_2 M_1}{EI} ds \\ & + \int \frac{T_0 T_1}{GJ} ds + \alpha_1 \int \frac{T_1^2}{GJ} ds + \alpha_2 \int \frac{T_2 T_1}{GJ} ds = 0 \end{aligned} \quad (118)$$

Taking the beam to be prismatic, and $\beta = \frac{EI}{GJ}$ gives:

$$\begin{aligned} & \int M_0 M_1 ds + \alpha_1 \int M_1^2 ds + \alpha_2 \int M_2 M_1 ds \\ & + \beta \int T_0 T_1 ds + \alpha_1 \beta \int T_1^2 ds + \alpha_2 \beta \int T_2 T_1 ds = 0 \end{aligned} \quad (119)$$

Similarly, substituting equations (115) and (116) into equation (114) gives:

$$\begin{aligned} & \int M_0 M_2 ds + \alpha_1 \int M_1 M_2 ds + \alpha_2 \int M_2^2 ds \\ & + \beta \int T_0 T_2 ds + \alpha_1 \beta \int T_1 T_2 ds + \alpha_2 \beta \int T_2^2 ds = 0 \end{aligned} \quad (120)$$

We can write equations (119) and (120) in matrix form for clarity:

$$\left\{ \begin{array}{l} \int M_0 M_1 ds + \beta \int T_0 T_1 ds \\ \int M_0 M_2 ds + \beta \int T_0 T_2 ds \end{array} \right\} + \left[\begin{array}{cc} \int M_1^2 ds + \beta \int T_1^2 ds & \int M_2 M_1 ds + \beta \int T_2 T_1 ds \\ \int M_1 M_2 ds + \beta \int T_1 T_2 ds & \int M_2^2 ds + \beta \int T_2^2 ds \end{array} \right] \begin{Bmatrix} \alpha_1 \\ \alpha_2 \end{Bmatrix} = 0 \quad (121)$$

Evaluating the integrals for the first equation gives:

$$\begin{aligned} \int M_0 M_1 ds &= \frac{-PL^3}{3} & \beta \int T_0 T_1 ds &= 0 \\ \int M_1^2 ds &= \frac{2L^3}{3} & \beta \int T_1^2 ds &= \beta L^3 \\ \int M_2 M_1 ds &= -\frac{1}{2}L^2 & \beta \int T_2 T_1 ds &= -\beta L^2 \end{aligned} \quad (122)$$

And for the second:

$$\begin{aligned} \int M_0 M_2 ds &= 0 & \beta \int T_0 T_2 ds &= 0 \\ \int M_1 M_2 ds &= -\frac{1}{2}L^2 & \beta \int T_1 T_2 ds &= -\beta L^2 \\ \int M_2^2 ds &= L & \beta \int T_2^2 ds &= \beta L \end{aligned} \quad (123)$$

Substituting these into equation (121), we have:

$$\left\{ \begin{array}{c} -\frac{PL^3}{3} \\ 0 \end{array} \right\} + \left[\begin{array}{cc} L^3 \left(\frac{2}{3} + \beta \right) & -L^2 \left(\frac{1}{2} + \beta \right) \\ -L^2 \left(\frac{1}{2} + \beta \right) & L(1 + \beta) \end{array} \right] \begin{Bmatrix} \alpha_1 \\ \alpha_2 \end{Bmatrix} = 0 \quad (124)$$

Giving:

$$\begin{Bmatrix} \alpha_1 \\ \alpha_2 \end{Bmatrix} = \begin{bmatrix} L^3 \left(\frac{2}{3} + \beta \right) & -L^2 \left(\frac{1}{2} + \beta \right) \\ -L^2 \left(\frac{1}{2} + \beta \right) & L(1 + \beta) \end{bmatrix}^{-1} \begin{Bmatrix} \frac{PL^3}{3} \\ 0 \end{Bmatrix} \quad (125)$$

Inverting the matrix gives:

$$\begin{Bmatrix} \alpha_1 \\ \alpha_2 \end{Bmatrix} = \frac{1}{5 + 8\beta} \begin{bmatrix} \left(\frac{12}{L^3} \right) (1 + \beta) & \left(\frac{6}{L^2} \right) (1 + 2\beta) \\ \left(\frac{6}{L^2} \right) (1 + 2\beta) & \left(\frac{4}{L} \right) (2 + 3\beta) \end{bmatrix} \begin{Bmatrix} \frac{PL^3}{3} \\ 0 \end{Bmatrix} \quad (126)$$

Thus:

$$\begin{Bmatrix} \alpha_1 \\ \alpha_2 \end{Bmatrix} = \frac{1}{5 + 8\beta} \begin{Bmatrix} \left(\frac{PL^3}{3} \right) \left(\frac{12}{L^3} \right) (1 + \beta) \\ \left(\frac{PL^3}{3} \right) \left(\frac{6}{L^2} \right) (1 + 2\beta) \end{Bmatrix} = \frac{P}{5 + 8\beta} \begin{Bmatrix} 4(1 + \beta) \\ 2L(1 + 2\beta) \end{Bmatrix} \quad (127)$$

Thus, since $\begin{Bmatrix} \alpha_1 \\ \alpha_2 \end{Bmatrix} \equiv \begin{Bmatrix} V_c \\ M_c \end{Bmatrix}$, we have:

$$V_c = P \left(\frac{4\beta + 4}{8\beta + 5} \right) \quad M_c = PL \left(\frac{4\beta + 2}{8\beta + 5} \right) \quad (128)$$

And this is the requested result.

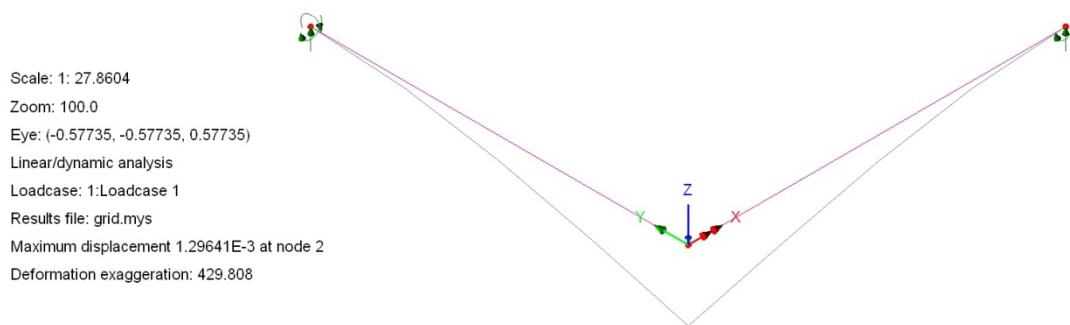
Some useful Matlab symbolic computation script appropriate to this problem is:

```
syms beta L P
A = [ L^3*(2/3+beta) -L^2*(0.5+beta);
      -L^2*(0.5+beta) L*(1+beta)];
A0 = [P*L^3/3; 0];
invA = inv(A);
invA = simplify(invA);
disp(simplify(det(A)));
disp(invA);
alpha = invA*A0;
alpha = simplify(alpha);
```

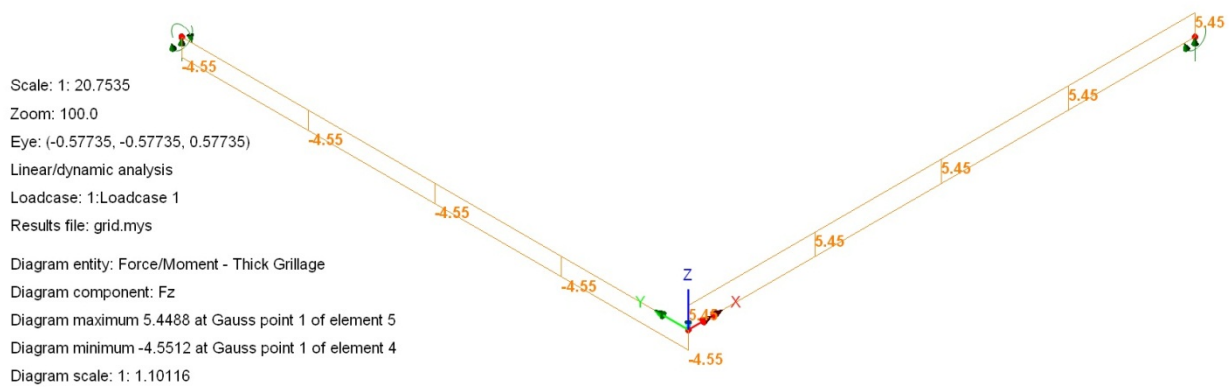
Numerical Example

For the numerical model previously considered, for these support conditions, LUSAS gives us:

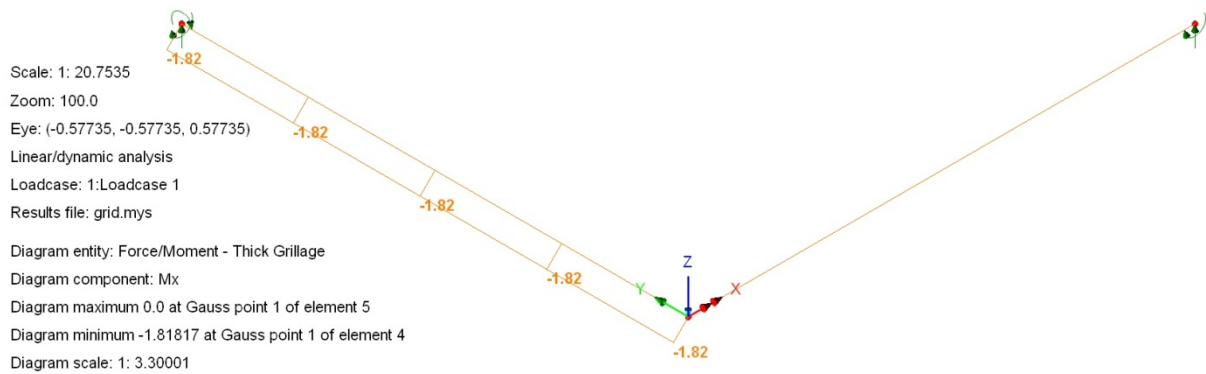
$$V_C = 5.45 \text{ kN} \quad M_C = 14.5 \text{ kNm}$$



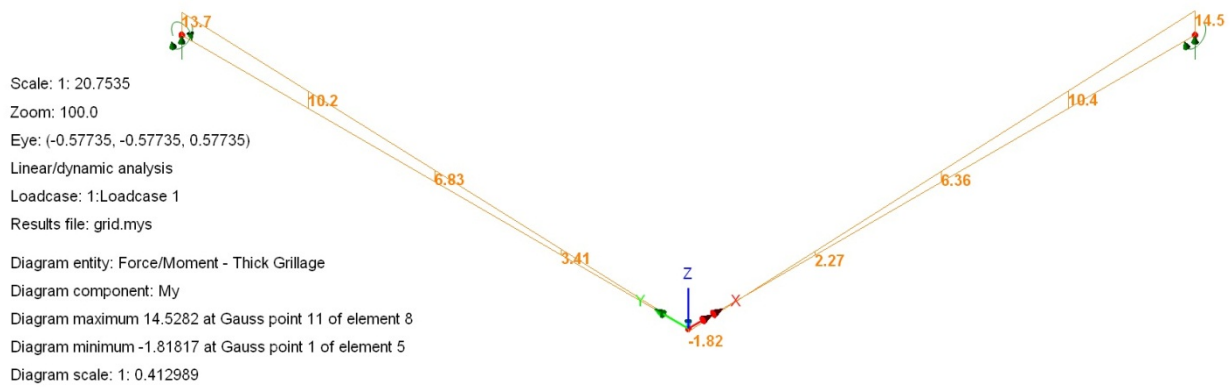
Deflected Shape



Shear Force Diagram



Torsion Moment Diagram



Bending Moment Diagram

3.3.3 Example 3

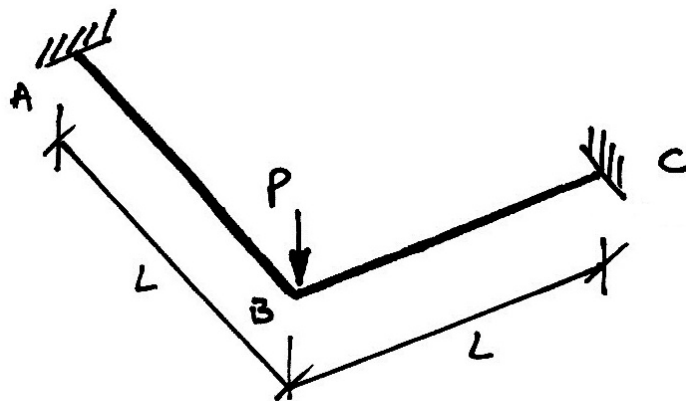
Problem

For the grid structure shown, which has flexural and torsional rigidities of EI and GJ respectively, show that the reactions at C are given by:

$$V_c = \frac{P}{2} \quad M_c = \frac{PL}{4} \cdot \frac{(2\beta + 1)}{(\beta + 1)} \quad T_c = \frac{PL}{4} \cdot \frac{1}{(\beta + 1)}$$

Where

$$\beta = \frac{EI}{GJ}$$

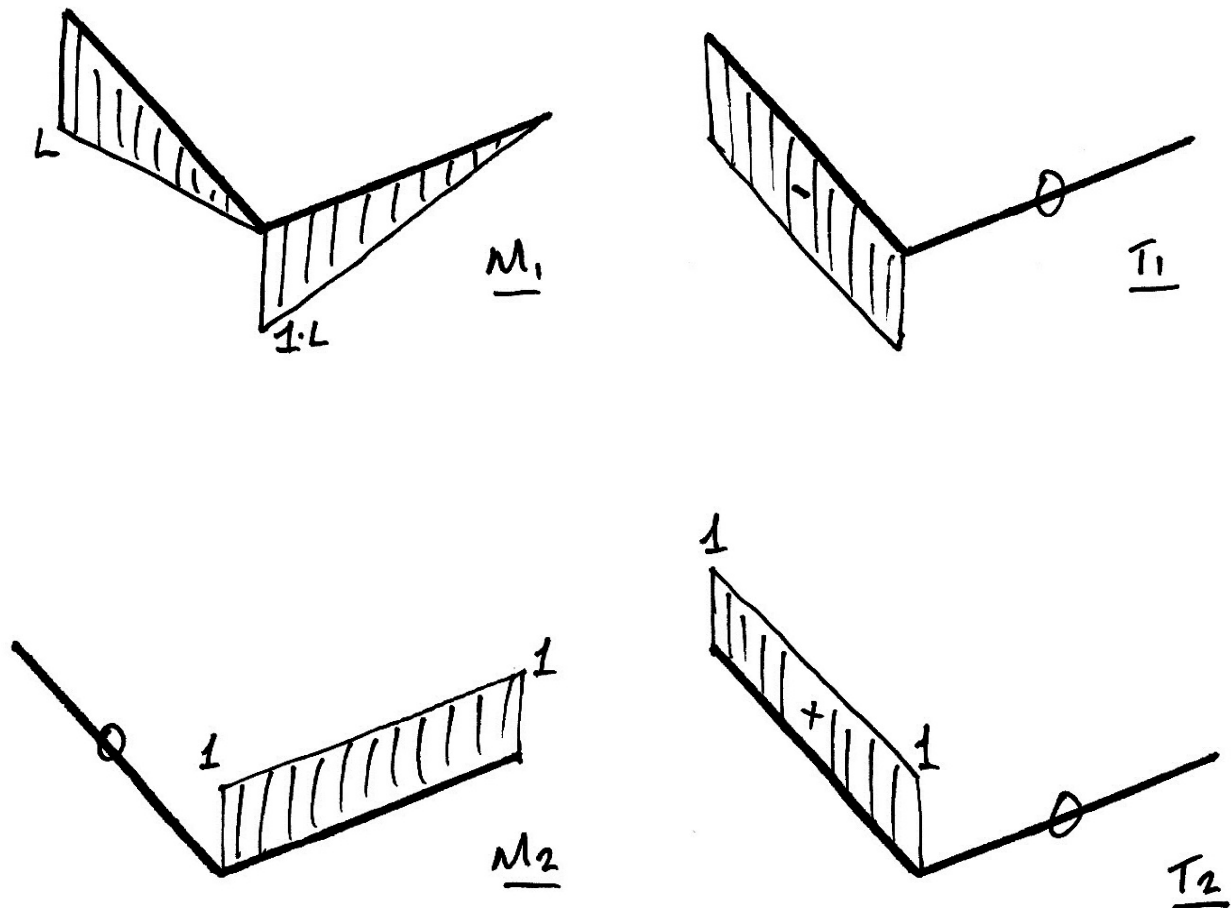


Solution

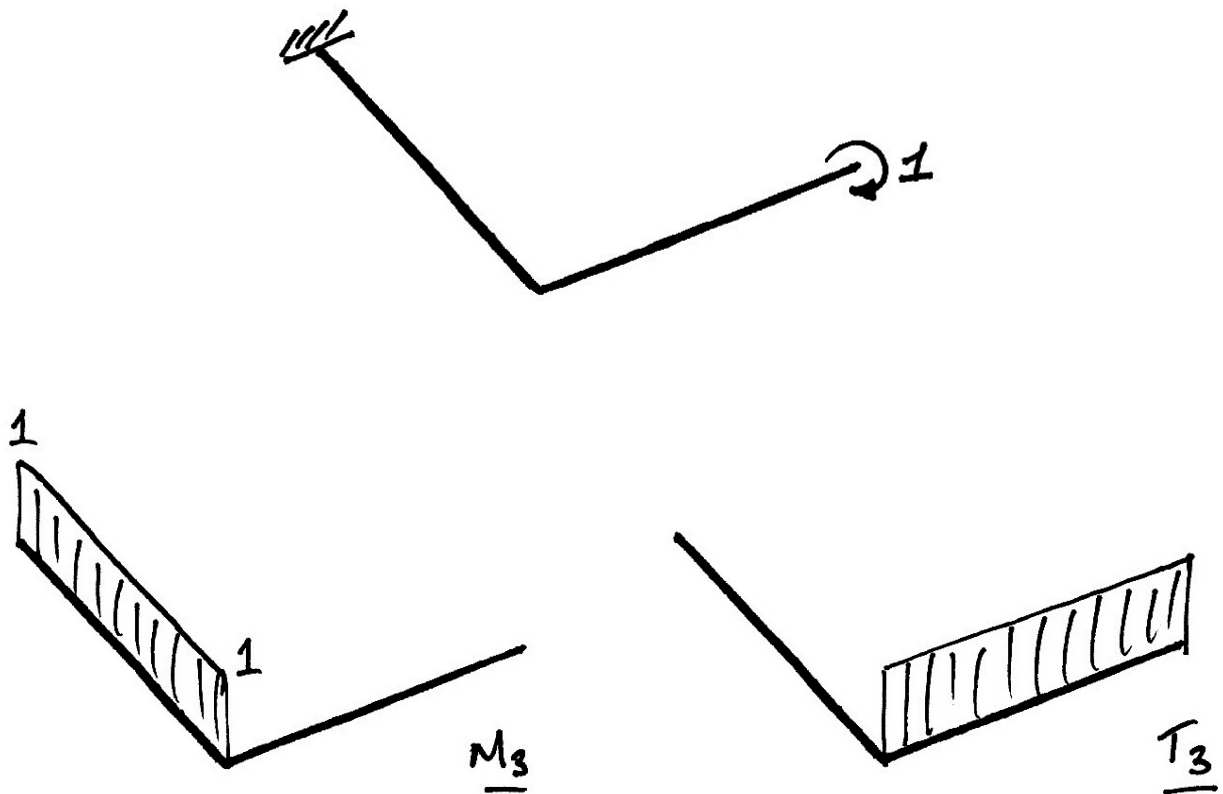
The general virtual work equations are:

$$\begin{aligned}\delta W &= 0 \\ \delta W_E &= \delta W_I \\ 0 &= \int \frac{M}{EI} \cdot \delta M \, ds + \int \frac{T}{GJ} \cdot \delta T \, ds\end{aligned}\quad (129)$$

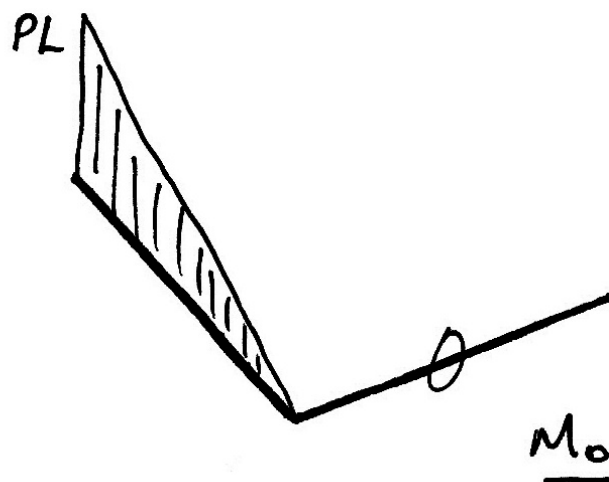
We choose the moment, vertical, and torsional restraints at C as the redundants. The vertical and moment redundants give (as before):



Applying the unit torsional moment gives:



Again the free bending moment diagram is:



Since there are three redundants, there are three possible equilibrium sets to use. Thus we have the following three equations:

$$0 = \int \frac{M}{EI} \cdot M_1 ds + \int \frac{T}{GJ} \cdot T_1 ds \quad (130)$$

$$0 = \int \frac{M}{EI} \cdot M_2 ds + \int \frac{T}{GJ} \cdot T_2 ds \quad (131)$$

$$0 = \int \frac{M}{EI} \cdot M_3 ds + \int \frac{T}{GJ} \cdot T_3 ds \quad (132)$$

Superposition of the structures gives:

$$M = M_0 + \alpha_1 M_1 + \alpha_2 M_2 + \alpha_3 M_3 \quad (133)$$

$$T = T_0 + \alpha_1 T_1 + \alpha_2 T_2 + \alpha_3 T_3 \quad (134)$$

Substituting, we get from equation (113):

$$0 = \int \frac{(M_0 + \alpha_1 M_1 + \alpha_2 M_2 + \alpha_3 M_3)}{EI} \cdot M_1 ds + \int \frac{(T_0 + \alpha_1 T_1 + \alpha_2 T_2 + \alpha_3 T_3)}{GJ} \cdot T_1 ds \quad (135)$$

$$\begin{aligned} & \int \frac{M_0 M_1}{EI} ds + \alpha_1 \int \frac{M_1^2}{EI} ds + \alpha_2 \int \frac{M_2 M_1}{EI} ds + \alpha_3 \int \frac{M_3 M_1}{EI} ds \\ & + \int \frac{T_0 T_1}{GJ} ds + \alpha_1 \int \frac{T_1^2}{GJ} ds + \alpha_2 \int \frac{T_2 T_1}{GJ} ds + \alpha_3 \int \frac{T_3 T_1}{GJ} ds = 0 \end{aligned} \quad (136)$$

Taking the beam to be prismatic, and $\beta = \frac{EI}{GJ}$ gives:

$$\begin{aligned} & \int M_0 M_1 ds + \alpha_1 \int M_1^2 ds + \alpha_2 \int M_2 M_1 ds + \alpha_3 \int M_3 M_1 ds \\ & + \beta \int T_0 T_1 ds + \alpha_1 \beta \int T_1^2 ds + \alpha_2 \beta \int T_2 T_1 ds + \alpha_3 \beta \int T_3 T_1 ds = 0 \end{aligned} \quad (137)$$

Similarly, substituting equations (115) and (116) into equations (114) and (132) gives:

$$\int M_0 M_2 ds + \alpha_1 \int M_1 M_2 ds + \alpha_2 \int M_2^2 ds + \alpha_3 \int M_3 M_2 ds + \beta \int T_0 T_2 ds + \alpha_1 \beta \int T_1 T_2 ds + \alpha_2 \beta \int T_2^2 ds + \alpha_3 \beta \int T_3 T_2 ds = 0 \quad (138)$$

$$\int M_0 M_3 ds + \alpha_1 \int M_1 M_3 ds + \alpha_2 \int M_2 M_3 ds + \alpha_3 \int M_3^2 ds + \beta \int T_0 T_3 ds + \alpha_1 \beta \int T_1 T_3 ds + \alpha_2 \beta \int T_2 T_3 ds + \alpha_3 \beta \int T_3^2 ds = 0 \quad (139)$$

We can write equations (119), (120), and (139) in matrix form for clarity:

$$\{\mathbf{M}_0\} + [\delta\mathbf{M}]\{\boldsymbol{\alpha}\} + \beta\{\mathbf{T}_0\} + \beta[\delta\mathbf{T}]\{\boldsymbol{\alpha}\} = \{\mathbf{0}\} \quad (140)$$

Or more concisely:

$$\{\mathbf{A}_0\} + [\delta\mathbf{A}]\{\boldsymbol{\alpha}\} = \{\mathbf{0}\} \quad (141)$$

In which $\{\mathbf{A}_0\}$ is the ‘free’ actions vector:

$$\{\mathbf{A}_0\} = \{\mathbf{M}_0\} + \beta\{\mathbf{T}_0\} = \begin{Bmatrix} \int M_0 M_1 ds + \beta \int T_0 T_1 ds \\ \int M_0 M_2 ds + \beta \int T_0 T_2 ds \\ \int M_0 M_3 ds + \beta \int T_0 T_3 ds \end{Bmatrix} \quad (142)$$

And $[\delta\mathbf{A}]$ is the virtual actions matrix:

$$[\delta\mathbf{A}] = [\delta\mathbf{M}] + \beta[\delta\mathbf{T}] = \begin{bmatrix} \int M_1^2 ds + \beta \int T_1^2 ds & \int M_2 M_1 ds + \beta \int T_2 T_1 ds & \int M_1 M_3 ds + \beta \int T_1 T_3 ds \\ \int M_1 M_2 ds + \beta \int T_1 T_2 ds & \int M_2^2 ds + \beta \int T_2^2 ds & \int M_2 M_3 ds + \beta \int T_2 T_3 ds \\ \int M_1 M_3 ds + \beta \int T_1 T_3 ds & \int M_2 M_3 ds + \beta \int T_2 T_3 ds & \int M_3^2 ds + \beta \int T_3^2 ds \end{bmatrix} \quad (143)$$

And $\{\boldsymbol{\alpha}\}$ is the redundant multipliers vector:

$$\{\boldsymbol{\alpha}\} = \begin{Bmatrix} \alpha_1 \\ \alpha_2 \\ \alpha_3 \end{Bmatrix} \quad (144)$$

Evaluating the free actions vector integrals gives:

$$\begin{aligned} \int M_0 M_1 ds &= \frac{-PL^3}{3} & \beta \int T_0 T_1 ds &= 0 \\ \int M_0 M_2 ds &= 0 & \beta \int T_0 T_2 ds &= 0 \\ \int M_0 M_3 ds &= \frac{PL^2}{2} & \beta \int T_0 T_3 ds &= 0 \end{aligned} \quad (145)$$

The virtual moment and torsion integrals are (noting that the matrices are symmetrical):

$$\begin{aligned} \int M_1^2 ds &= \frac{2L^3}{3} & \int M_2 M_1 ds &= -\frac{L^2}{2} & \int M_1 M_3 ds &= -\frac{L^2}{2} \\ & & \int M_2^2 ds &= L & \int M_2 M_3 ds &= 0 \\ & & & & \int M_3^2 ds &= L \end{aligned} \quad (146)$$

$$\begin{aligned} \int T_1^2 ds &= L^3 & \int T_2 T_1 ds &= -L^2 & \int T_1 T_3 ds &= 0 \\ & & \int T_2^2 ds &= L & \int T_2 T_3 ds &= 0 \\ & & & & \int T_3^2 ds &= L \end{aligned} \quad (147)$$

Substituting these integral results into equation (141) gives:

$$\begin{Bmatrix} -\frac{PL^3}{3} \\ 0 \\ \frac{PL^2}{2} \end{Bmatrix} + \begin{bmatrix} \frac{2L^3}{3} + \beta L^3 & -\frac{L^2}{2} - \beta L^2 & -\frac{L^2}{2} \\ -\frac{L^2}{2} - \beta L^2 & L + \beta L & 0 \\ -\frac{L^2}{2} & 0 & L + \beta L \end{bmatrix} \begin{Bmatrix} \alpha_1 \\ \alpha_2 \\ \alpha_3 \end{Bmatrix} = 0 \quad (148)$$

$$\begin{bmatrix} L^3 \left(\frac{2}{3} + \beta \right) & -L^2 \left(\frac{1}{2} + \beta \right) & -\frac{L^2}{2} \\ -L^2 \left(\frac{1}{2} + \beta \right) & L(1 + \beta) & 0 \\ -\frac{L^2}{2} & 0 & L(1 + \beta) \end{bmatrix} \begin{Bmatrix} \alpha_1 \\ \alpha_2 \\ \alpha_3 \end{Bmatrix} = \begin{Bmatrix} \frac{PL^3}{3} \\ 0 \\ -\frac{PL^2}{2} \end{Bmatrix} \quad (149)$$

Inverting the matrix gives:

$$\begin{Bmatrix} \alpha_1 \\ \alpha_2 \\ \alpha_3 \end{Bmatrix} = \begin{bmatrix} \frac{6}{L^3} \left(\frac{\beta + 1}{4\beta + 1} \right) & \frac{3}{L^2} \left(\frac{2\beta + 1}{4\beta + 1} \right) & \frac{3}{L^2} \left(\frac{1}{4\beta + 1} \right) \\ \frac{3}{L^2} \left(\frac{2\beta + 1}{4\beta + 1} \right) & \frac{1}{2L} \left[\frac{12\beta^2 + 20\beta + 5}{(4\beta + 1)(\beta + 1)} \right] & \frac{3}{2L} \left[\frac{2\beta + 1}{(4\beta + 1)(\beta + 1)} \right] \\ \frac{3}{L^2} \left(\frac{1}{4\beta + 1} \right) & \frac{3}{2L} \left[\frac{2\beta + 1}{(4\beta + 1)(\beta + 1)} \right] & \frac{1}{2L} \left[\frac{8\beta + 5}{(4\beta + 1)(\beta + 1)} \right] \end{bmatrix} \begin{Bmatrix} \frac{PL^3}{3} \\ 0 \\ -\frac{PL^2}{2} \end{Bmatrix} \quad (150)$$

Thus:

$$\begin{Bmatrix} \alpha_1 \\ \alpha_2 \\ \alpha_3 \end{Bmatrix} = \left(\frac{1}{4\beta+1} \right) \begin{Bmatrix} \frac{PL^3}{3} \left(\frac{6}{L^3} \right) (\beta+1) - \frac{PL^2}{2} \left(\frac{3}{L^2} \right) \\ \frac{PL^3}{3} \left(\frac{3}{L^2} \right) (2\beta+1) - \frac{PL^2}{2} \left(\frac{3}{2L} \right) \left(\frac{2\beta+1}{\beta+1} \right) \\ \frac{PL^3}{3} \left(\frac{3}{L^2} \right) - \frac{PL^2}{2} \left(\frac{1}{2L} \right) \left(\frac{8\beta+5}{\beta+1} \right) \end{Bmatrix} \quad (151)$$

Simplifying, we get:

$$\begin{Bmatrix} \alpha_1 \\ \alpha_2 \\ \alpha_3 \end{Bmatrix} = \begin{Bmatrix} \frac{P}{2} \\ \frac{PL}{4} \cdot \frac{(2\beta+1)}{(\beta+1)} \\ \frac{PL}{4} \cdot \frac{1}{(\beta+1)} \end{Bmatrix} \quad (152)$$

Since the redundants chosen are the reactions required, the problem is solved.

Some useful Matlab symbolic computation script appropriate to this problem is:

```
syms beta L P
A = [ L^3*(beta+2/3)  -L^2*(beta+0.5)  -L^2/2;
      -L^2*(beta+0.5)  L*(beta+1)      0;
      -L^2/2          0                L*(beta+1)];
A0 = [P*L^3/3; 0; -P*L^2/2];
invA = inv(A);
invA = simplify(invA);
disp(simplify(det(A)));
disp(invA);
alpha = invA*A0;
alpha = simplify(alpha);
```

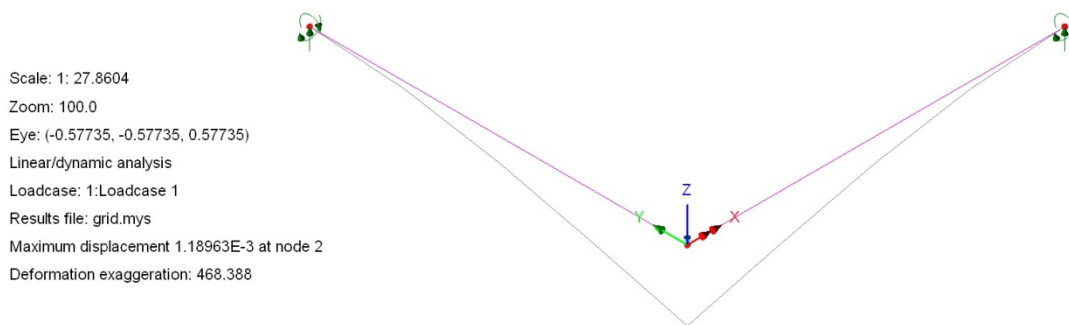
Numerical Example

For the numerical model previously considered, for these support conditions, LUSAS gives us:

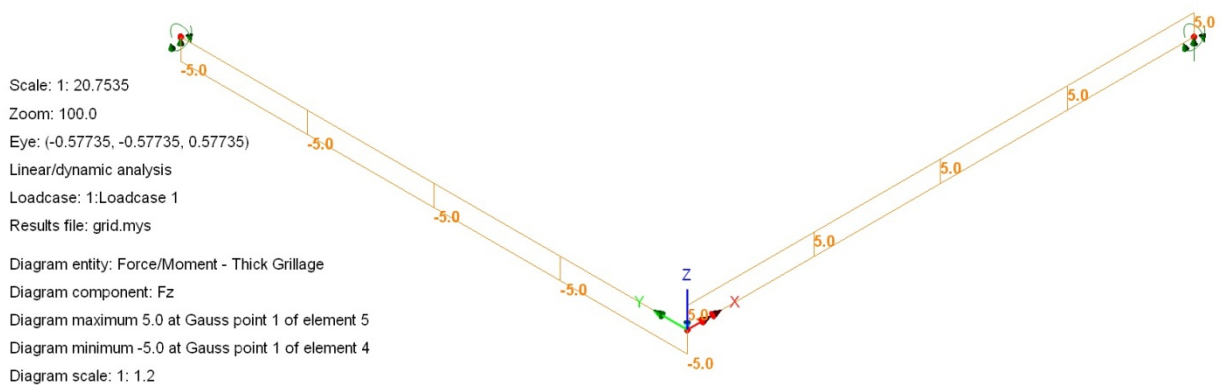
$$V_C = 5.0 \text{ kN}$$

$$M_C = 13.3 \text{ kNm}$$

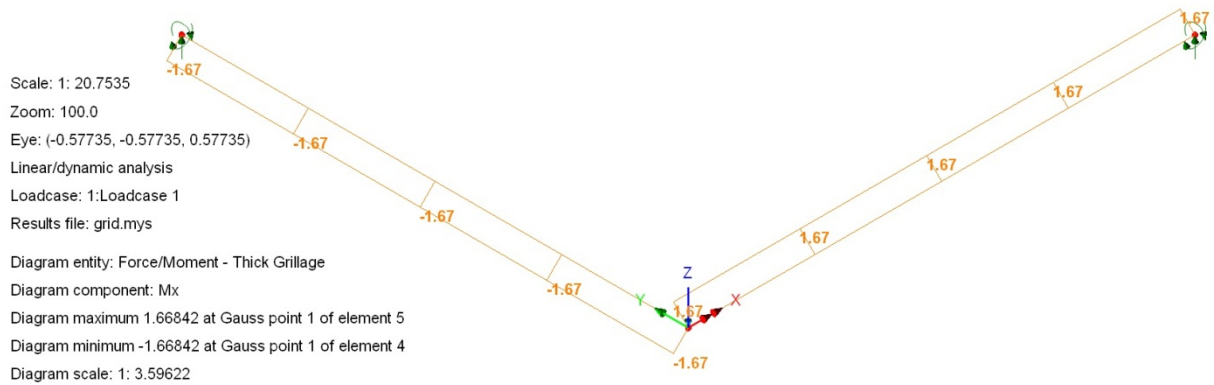
$$T_C = 1.67 \text{ kNm}$$



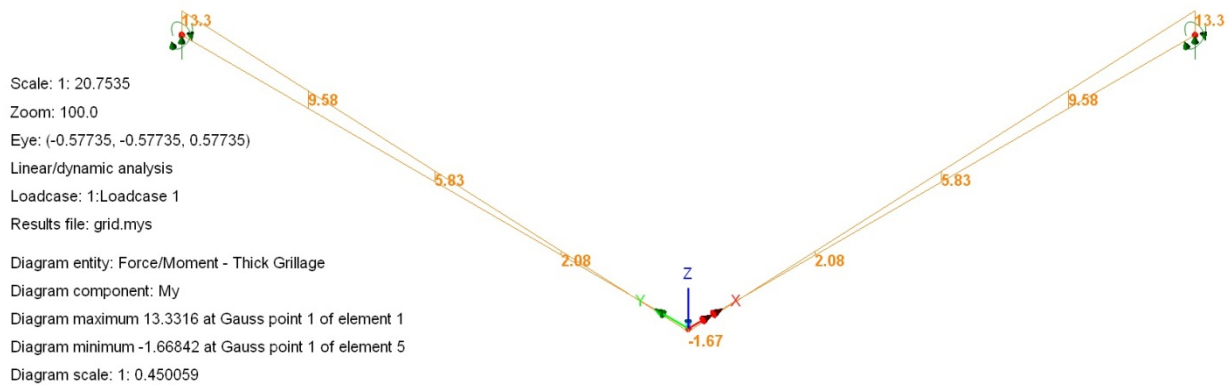
Deflected Shape



Shear Force Diagram



Torsion Moment Diagram



Bending Moment Diagram